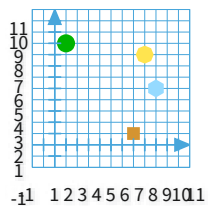


#1

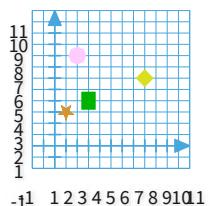
Which shape is at (9, 5)?



Show your work

#2

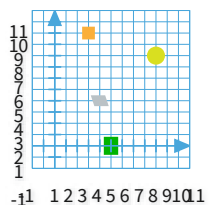
Which shape is at (1, 3)?



Show your work

#3

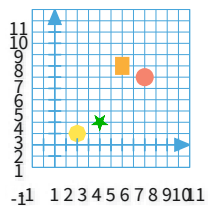
Which shape is at (4, 4)?



Show your work

#4

Which shape is at (8, 6)?


☐

☐

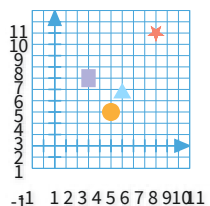
☐

☐

Show your work

#5

Which shape is at (9, 10)?


☐

☐

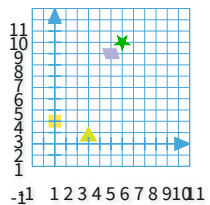
☐

☐

Show your work

#6

Which shape is at (0, 2)?


☐

☐

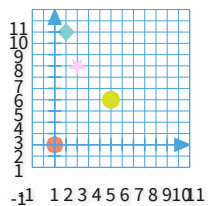
☐

☐

Show your work

#7

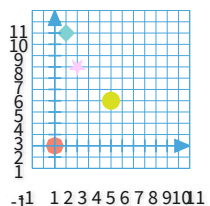
Which shape is at (5, 4)?



Show your work

#8

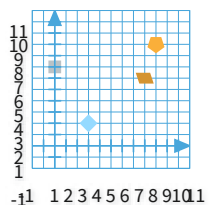
Which shape is at (5, 4)?



Show your work

#9

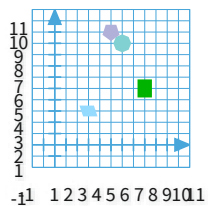
Which shape is at (3, 2)?



Show your work

#10

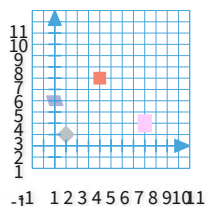
Which shape is at (8, 5)?



Show your work

#11

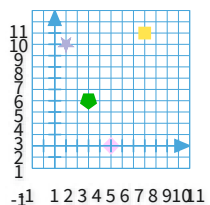
Which shape is at (4, 6)?



Show your work

#12

Which shape is at (5, 0)?



Show your work

Question	Answer
#1	choice 4
#2	choice 3
#3	choice 2
#4	choice 1
#5	choice 2
#6	choice 2
#7	choice 1
#8	choice 1
#9	choice 2
#10	choice 2
#11	choice 3
#12	choice 3