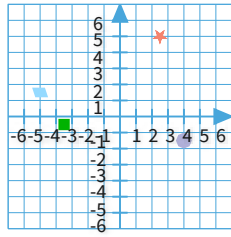


#1

In which quadrant is the star?

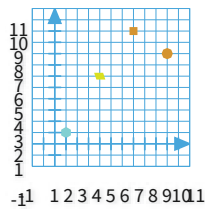






- Quadrant III
- Quadrant II
- Quadrant I
- Quadrant IV

Show your work

#2

Which shape is at (1, 1)?

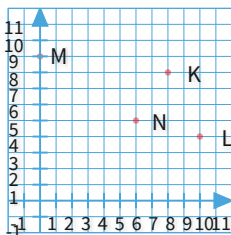


- 
- 
- 
- 

Show your work

#3

Which point is at (8, 8)?

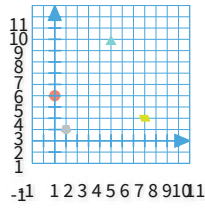


- N
- M
- L
- K

Show your work

#4

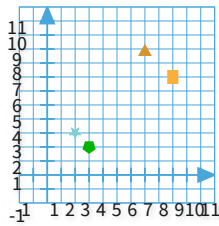
Which shape is at (8, 2)?



Show your work

#5

What are the coordinates of the star? Write your answer as whole numbers or decimals, rounded to the nearest 0.5.

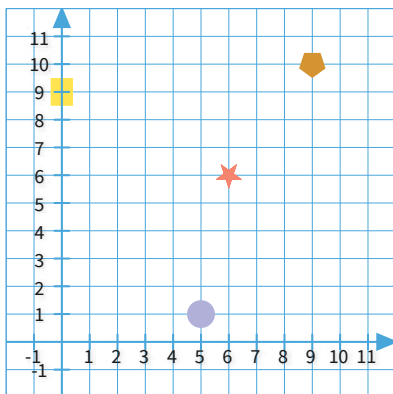


- (2,3)
- (3,2)
- (9,7)
- (7,9)

Show your work

#6

What are the coordinates of the pentagon? Write your answer as whole numbers or decimals, rounded to the nearest 0.5.

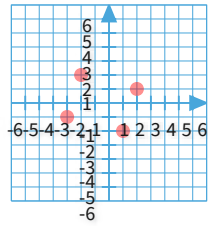


(,)

Show your work

#7

Which point is in Quadrant I?

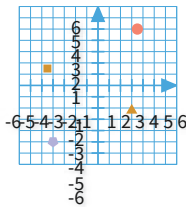






- $(-2, 2)$
- $(2, 1)$
- $(1, -2)$
- $(-3, -1)$

Show your work

#8

Which shape is in Quadrant I?

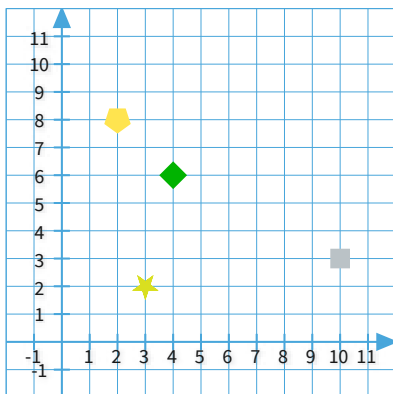


- 
- 
- 
- 

Show your work

#9

What are the coordinates of the rhombus? Write your answer as whole numbers or decimals, rounded to the nearest 0.5.

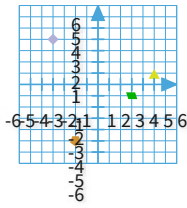


(,)

Show your work

#10

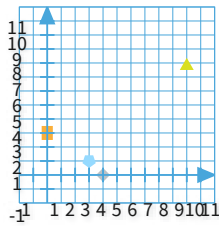
Which shape is in Quadrant II?



Show your work

#11

What are the coordinates of the rectangle? Write your answer as whole numbers or decimals, rounded to the nearest 0.5.



(3,1)

(0,3)

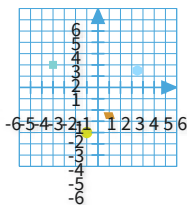
(4,0)

(10,8)

Show your work

#12

Which shape is in Quadrant IV?



Show your work

| Question | Answer |
|----------|----------|
| #1 | choice 3 |
| #2 | choice 1 |
| #3 | choice 4 |
| #4 | choice 2 |
| #5 | choice 1 |
| #6 | 9, 10 |
| #7 | choice 2 |
| #8 | choice 4 |
| #9 | 4, 6 |
| #10 | choice 2 |
| #11 | choice 2 |
| #12 | choice 4 |