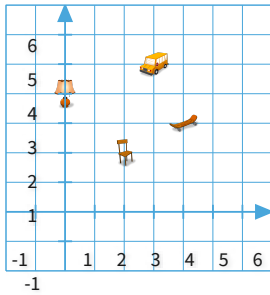




#1

Where is the lamp?



Legend

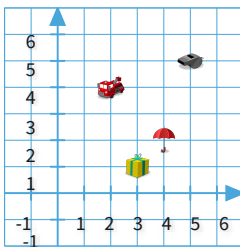
-  lamp
-  chair
-  bus
-  skateboard

(  ,  )





Show your work

#2

What is at (4, 2)?



Legend

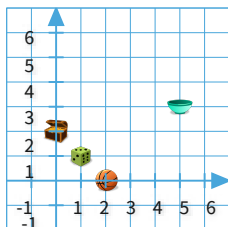
-  umbrella
-  whistle
-  present
-  fire truck

- ☐ umbrella
- ☐ fire truck
- ☐ whistle
- ☐ present





Show your work

#3

Where is the bowl?



Legend

-  bowl
-  basketball
-  die
-  treasure chest

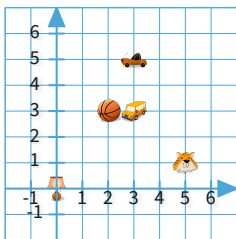
- ☐ (2,0)
- ☐ (1,1)
- ☐ (0,2)
- ☐ (5,3)

Show your work



#4

Mason walked from the basketball to the bus and then from the bus to the car. How far did Mason walk in all?



Legend

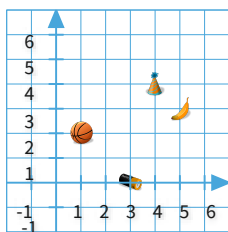
- basketball
- bus
- car
- lamp
- tiger

- ☐ 2 units
- ☐ 4 units
- ☐ 3 units
- ☐ 0 units

Show your work

#5

Where is the hat?



Legend

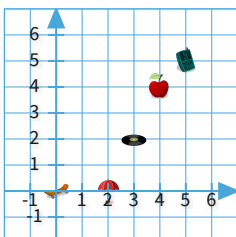
- hat
- battery
- basketball
- banana

- ☐ (3,0)
- ☐ (1,2)
- ☐ (4,4)
- ☐ (5,3)

Show your work

#6

How far is it from the umbrella to the skateboard?



Legend

- umbrella
- skateboard
- apple
- record
- cell phone

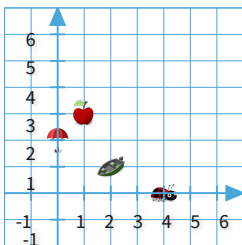
- ☐ 4 units
- ☐ 2 units
- ☐ 0 units
- ☐ 3 units

Show your work



#7

What is at (0, 2)?



Legend

- umbrella
- boat
- apple
- ladybug

☐ umbrella

☐ apple

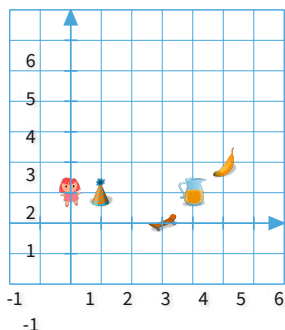
☐ boat

☐ ladybug

Show your work

#8

Ella walked from the doll to the pitcher and then from the pitcher to the hat. How far did Ella walk in all?



Legend

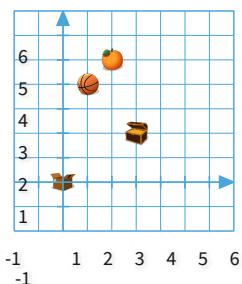
- doll
- pitcher
- hat
- banana
- skateboard

units

Show your work

#9

Where is the box?



Legend

- box
- orange
- basketball
- treasure chest

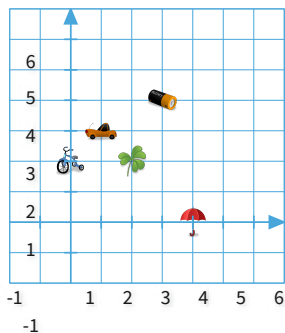
(  ,  )

Show your work



#10

How far is it from the clover to the tricycle?



Legend

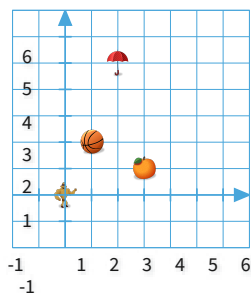
- clover
- tricycle
- battery
- umbrella
- car

units

Show your work

#11

Where is the umbrella?



Legend

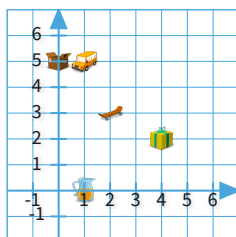
- umbrella
- basketball
- orange
- action figure

(  ,  )

Show your work

#12

Ella walked from the pitcher to the bus and then from the bus to the box. How far did Ella walk in all?



Legend

- pitcher
- bus
- box
- present
- skateboard

☐ 6 units

☐ 8 units

☐ 5 units

☐ 7 units

Show your work

| Question | Answer   |
|----------|----------|
| #1       | 0, 4     |
| #2       | choice 1 |
| #3       | choice 4 |
| #4       | choice 3 |
| #5       | choice 3 |
| #6       | choice 2 |
| #7       | choice 1 |
| #8       | 7        |
| #9       | 0, 0     |
| #10      | 2        |
| #11      | 2, 5     |
| #12      | choice 1 |