


#1

Jack made a table of the baskets he made at practice. Use the data below to complete the pictograph.

Baskets made				
Day	Monday	Tuesday	Wednesday	Thursday
Baskets	7	6	3	5




Show your work

#2

Daniel is a referee for a football league. He made a chart of the number of penalties he has given each team. Use the data below to complete the pictograph.

Penalties Given				
Team Name	Predators	Blue Bombers	Marauders	Cougars
Penalties	7	10	6	5




Show your work

#3

The grade 4 class at Sarah Elementary School made a chart of the number of presents each of them gave for Christmas. Use the data below to complete the pictograph.

Presents Given				
Name	Nathan	Ethan	Elizabeth	Grace
Number	7	9	4	6




Show your work

#4

Kevin lives in the rainy city of Vancouver. He made a chart of the number of times he had to use an umbrella each month. Use the data below to complete the pictograph.

Umbrellas Used Each Month

Month	January	February	March	April
Umbrellas	7	9	2	4




Show your work

#5

Abigail is a galactic explorer looking for habitable planets and has arrived at a new solar system, Gliese 581. She wants to mark the number of moons around each planet in a graph. Use the data below to complete the pictograph.

Moons Around Planets

Planet	Gliese 581 b	Gliese 581 c	Gliese 581 d	Gliese 581 e
Moons	8	7	3	9




Show your work

#6

Dahlia frequently flies for business. She made a chart of the number of flights made each month. Use the data below to complete the pictograph.

Flights Made

Month	January	February	March	April
Flights	10	2	1	8



Show your work

**#7** The grade 4 class at Ryan Elementary School made a chart of the number of presents each of them gave for Christmas. Use the data below to complete the pictograph.


Presents Given				
Name	Gavin	Gabriel	Anthony	Matthew
Number	0	7	1	10



Show your work

**#8** The grade 4 class at Daniel Elementary School made a chart of the number of presents each of them gave for Christmas. Use the data below to complete the pictograph.


Presents Given				
Name	Grace	Joshua	Jack	Alexa
Number	9	9	2	9



Show your work

**#9** Evan made a table of the baskets he made at practice. Use the data below to complete the pictograph.

Baskets made				
Day	Monday	Tuesday	Wednesday	Thursday
Baskets	7	8	3	10




Show your work

#10

The grade 4 class at Christopher Elementary School made a chart of the number of presents each of them gave for Christmas. Use the data below to complete the pictograph.

Presents Given				
Name	Natalie	Grace	Kayla	Ella
Number	8	6	8	0




Show your work

#11

Sophia is covered in ants. The table below shows where on her body the ants are located. Use the data below to complete the pictograph.

Ant Location				
Location	Arm	Stomach	Leg	Face
Number of Ants	9	2	5	4



Show your work

#12

Emily made a table of the number tigers she saw on safari. Use the data below to complete the pictograph.

Tigers Seen				
Day	Monday	Tuesday	Wednesday	Thursday
Tigers	0	1	6	4



Show your work

Question	Answer
#1	7, 6, 3, 5
#2	7, 10, 6, 5
#3	7, 9, 4, 6
#4	7, 9, 2, 4
#5	8, 7, 3, 9
#6	10, 2, 1, 8
#7	0, 7, 1, 10
#8	9, 9, 2, 9
#9	7, 8, 3, 10
#10	8, 6, 8, 0
#11	9, 2, 5, 4
#12	0, 1, 6, 4