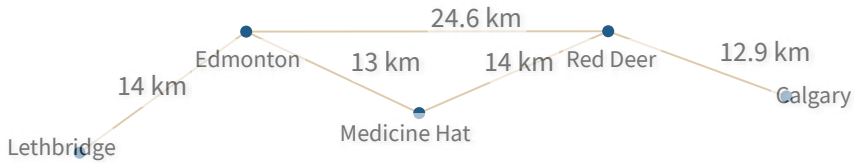




#1

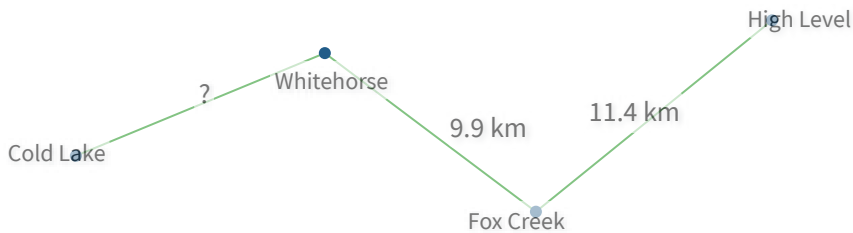
Using the paths shown, how long is the shortest route from Edmonton to Calgary?

 km

Show your work

#2

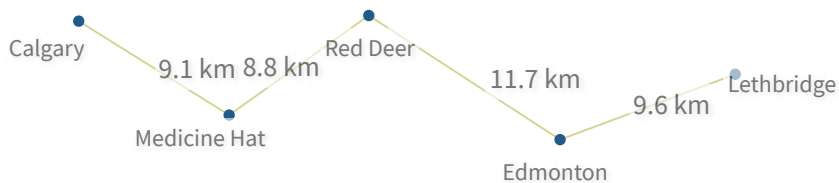
Using the paths shown, the distance from Cold Lake to High Level is 31.4 km. How far is it from Cold Lake to Whitehorse?

 km

Show your work

#3

Using the paths shown, how far is it from Medicine Hat to Edmonton?




- ☐ 15.4 km
- ☐ 20.5 km
- ☐ 15.9 km
- ☐ 19.1 km

Show your work



#4

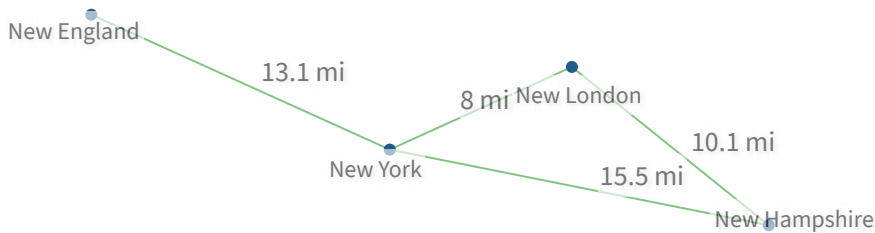
Using the paths shown, how far is it from Leduc to St. Albert?

 mi

Show your work

#5

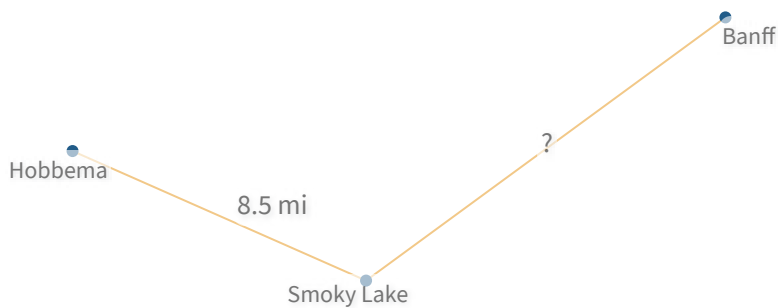
Using the paths shown, how long is the shortest route from New England to New Hampshire?

 mi

Show your work

#6

Using the paths shown, the distance from Hobbema to Banff is 20.3 mi. How far is it from Smoky Lake to Banff?

 mi

Show your work



#7

Using the paths shown, the distance from Madison to Beaumont is 28.6 km. How far is it from Caroline to Beaumont?



km

Show your work

#8

Using the paths shown, how long is the shortest route from Yellowknife to Cold Lake?

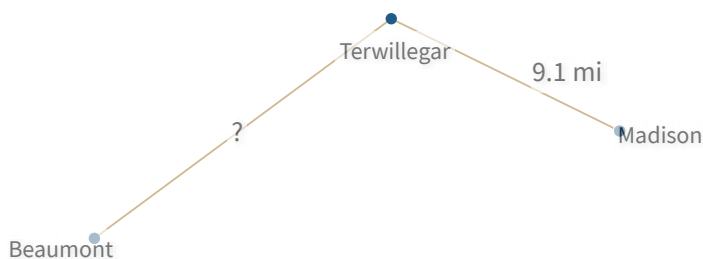


mi

Show your work

#9

Using the paths shown, the distance from Beaumont to Madison is 22.3 mi. How far is it from Beaumont to Terwillegar?



- ☐ 14.8 mi ☐ 13.3 mi
- ☐ 13.2 mi ☐ 13.4 mi

Show your work



#10

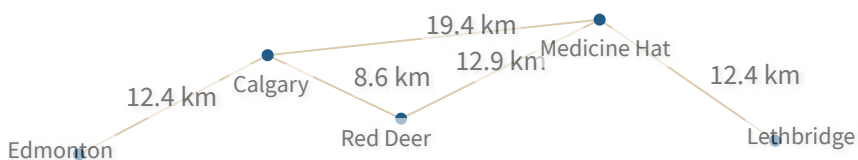
Using the paths shown, how long is the shortest route from Whitehorse to Fox Creek?

☐ 33 km☐ 36 km☐ 30.6 km☐ 25.9 km

Show your work

#11

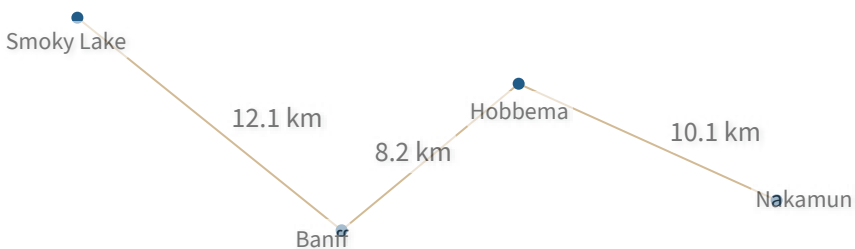
Using the paths shown, how long is the shortest route from Edmonton to Lethbridge?

 km

Show your work

#12

Using the paths shown, how far is it from Smoky Lake to Banff?

 km

Show your work

Question	Answer
#1	37.5
#2	10.1
#3	choice 2
#4	8.9
#5	28.6
#6	11.8
#7	11.2
#8	28.9
#9	choice 3
#10	choice 3
#11	44.2
#12	12.1