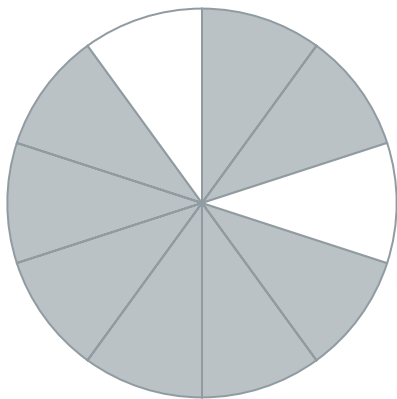


#1


What fraction of the shape is filled? Write your answer using a percent sign (For example: 50%).



Show your work

#2


What fraction of the shape is filled? Write your answer using a percent sign (For example: 50%).



Show your work

#3

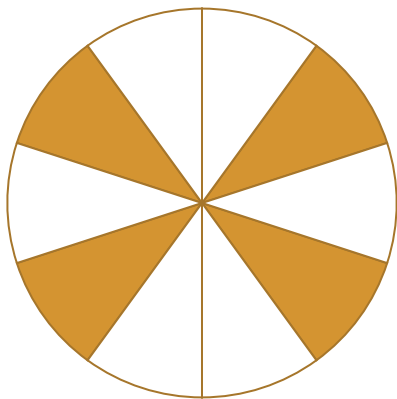
What fraction of the shape is filled? Write your answer using a percent sign (For example: 50%).

☐ 80%☐ 70%☐ 90%☐ 100%

Show your work

#4


What fraction of the shape is filled? Write your answer using a percent sign (For example: 50%).



Show your work

#5

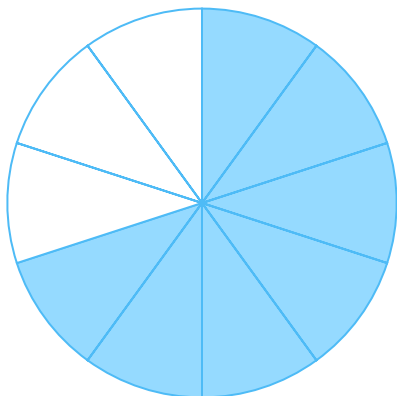
What fraction of the shape is filled? Write your answer using a percent sign (For example: 50%).



Show your work

#6

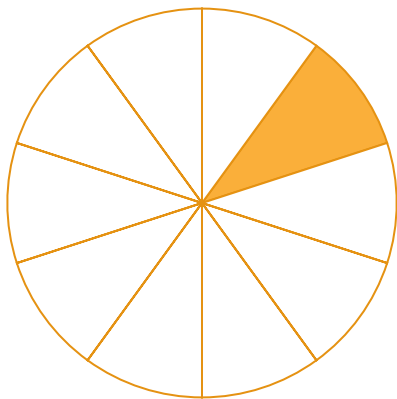
What fraction of the shape is filled? Write your answer using a percent sign (For example: 50%).



Show your work

#7

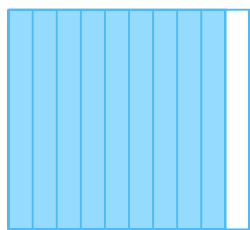
What fraction of the shape is filled? Write your answer using a percent sign (For example: 50%).



Show your work

#8

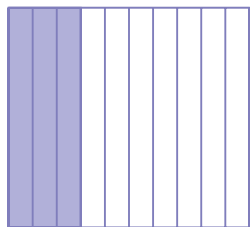
What fraction of the shape is filled? Write your answer using a percent sign (For example: 50%).

☐ 90%☐ 80%☐ 100%☐ 70%

Show your work

#9

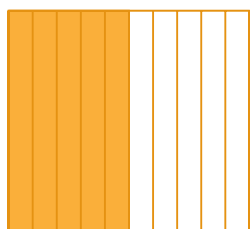
What fraction of the shape is filled? Write your answer using a percent sign (For example: 50%).

☐ 40%☐ 30%☐ 50%☐ 10%

Show your work

#10


What fraction of the shape is filled? Write your answer using a percent sign (For example: 50%).

☐ 20%☐ 50%☐ 30%☐ 80%

Show your work

#11

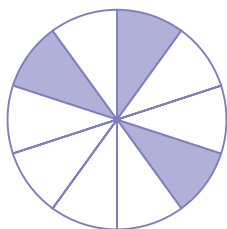
What fraction of the shape is filled? Write your answer using a percent sign (For example: 50%).

☐ 40%☐ 30%☐ 50%☐ 10%

Show your work

#12

What fraction of the shape is filled? Write your answer using a percent sign (For example: 50%).

☐ 30%☐ 50%☐ 40%☐ 60%

Show your work

Question	Answer
#1	80%
#2	20%
#3	choice 4
#4	40%
#5	80%
#6	70%
#7	10%
#8	choice 1
#9	choice 2
#10	choice 2
#11	choice 2
#12	choice 1