

#1

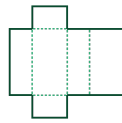
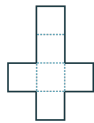
Which figure will this net make?



Show your work

#2

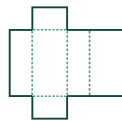
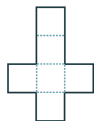
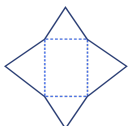
Which net will make this figure?



Show your work

#3

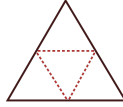
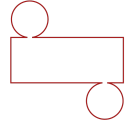
Which net will make this figure?



Show your work

#4

Which net will make this figure?



Show your work

#5

Which figure will this net make?



Show your work

#6

Which figure will this net make?



Show your work

#7

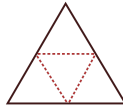
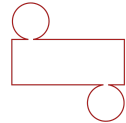
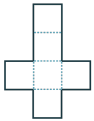
Which figure will this net make?



Show your work

#8

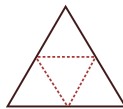
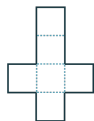
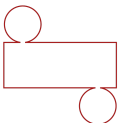
Which net will make this figure?



Show your work

#9

Which net will make this figure?



Show your work

#10

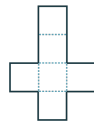
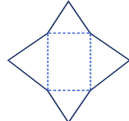
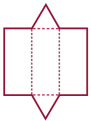
Which figure will this net make?



Show your work

#11

Which net will make this figure?



Show your work

#12

Which figure will this net make?



Show your work

Question	Answer
#1	choice 1
#2	choice 2
#3	choice 1
#4	choice 3
#5	choice 3
#6	choice 3
#7	choice 2
#8	choice 3
#9	choice 2
#10	choice 1
#11	choice 2
#12	choice 2