

#1

What is the opposite of -37 ?

Show your work

#2

What is the opposite of 42 ?

Show your work

#3

What is $|-18|$?

0

-18

18

Show your work

#4

What is the opposite of -42 ?

Show your work

#5

What is $|-42|$?

0

-42

42

Show your work

#6

What is the opposite of -35 ?

-35

35

0

Show your work

#7

What is the opposite of 48?

-48

48

0

Show your work

#8

What is $|-19|$?

-19

0

19

Show your work

#9

What is the opposite of 15?

Show your work




#10

What is $|31|$?

Show your work

#11

What is $|-28|$?



Show your work

#12

What is $|-44|$?

Show your work

Question	Answer
#1	37
#2	-42
#3	choice 3
#4	42
#5	choice 3
#6	choice 2
#7	choice 1
#8	choice 3
#9	-15
#10	31
#11	choice 2
#12	44