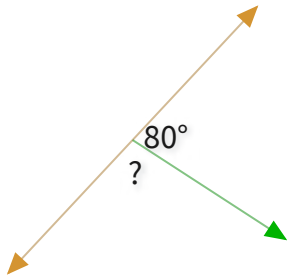


#1

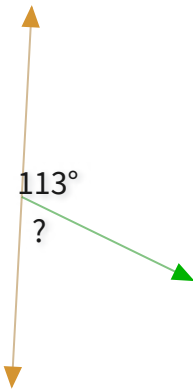
What is the value of a missing angle?



Show your work

#2

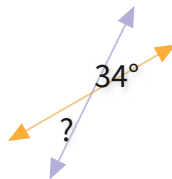
What is the value of a missing angle?



Show your work

#3

What is the value of a missing angle?



☐ 28°

☐ 34°

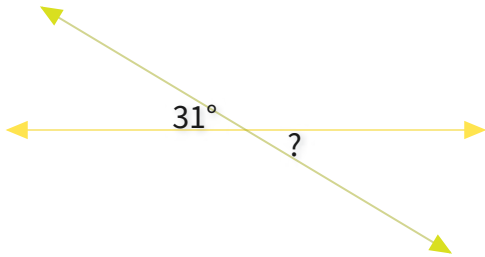
☐ 23°

☐ 24°

Show your work

#4

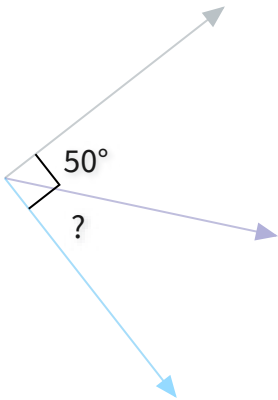
What is the value of a missing angle?



Show your work

#5

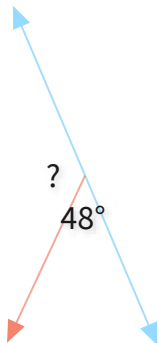
What is the value of a missing angle?



Show your work

#6

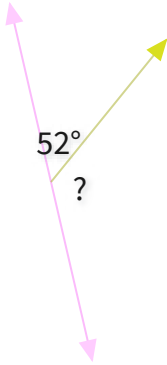
What is the value of a missing angle?



Show your work

#7

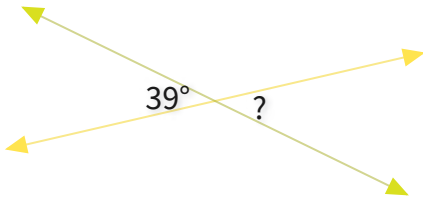
What is the value of a missing angle?

°

Show your work

#8

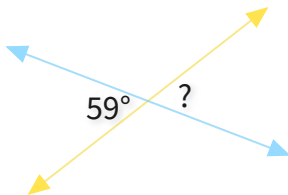
What is the value of a missing angle?

°

Show your work

#9

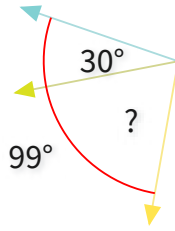
What is the value of a missing angle?

°

Show your work

#10

What is the value of a missing angle?



☐ 54°

☐ 69°

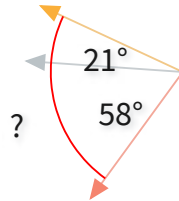
☐ 90°

☐ 79°

Show your work

#11

What is the value of a missing angle?



☐ 84°

☐ 75°


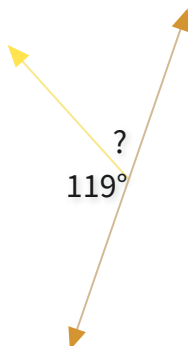
☐ 79°

☐ 74°

Show your work

#12

What is the value of a missing angle?



Show your work

Question	Answer
#1	100
#2	67
#3	choice 2
#4	31
#5	40
#6	132
#7	128
#8	39
#9	59
#10	choice 2
#11	choice 3
#12	61