


#1

Using the paths shown, how far is it from Glenwood to Wetaskiwin?

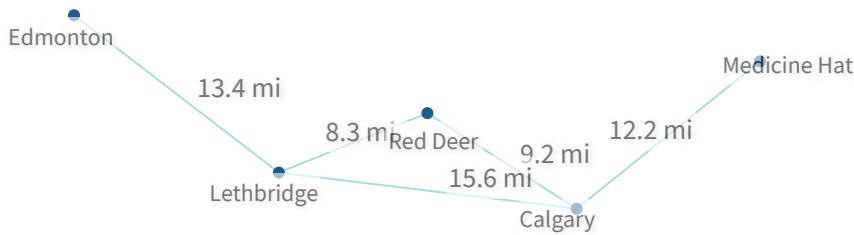


- 10 mi
- 9 mi
- 8.4 mi
- 6.7 mi

Show your work

#2

Using the paths shown, how long is the shortest route from Edmonton to Medicine Hat?

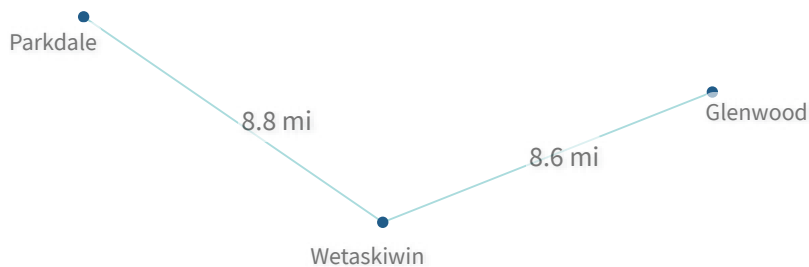


mi

Show your work

#3

Using the paths shown, how far is it from Parkdale to Glenwood?

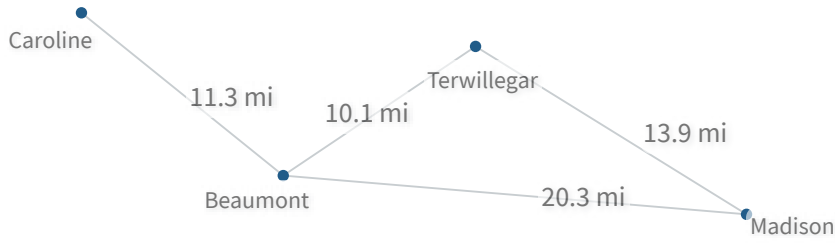


- 17.4 mi
- 14.7 mi
- 17.6 mi
- 13.8 mi

Show your work

#4

Using the paths shown, how long is the shortest route from Caroline to Madison?

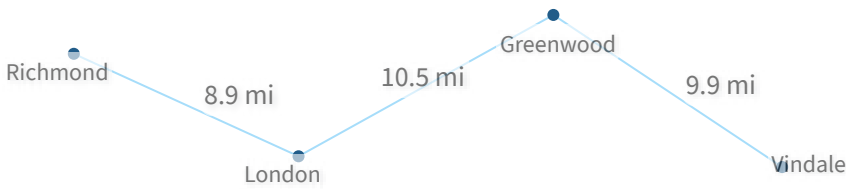


- 22.1 mi
- 29 mi
- 37.1 mi
- 31.6 mi

Show your work

#5

Using the paths shown, how far is it from Greenwood to Vindale?

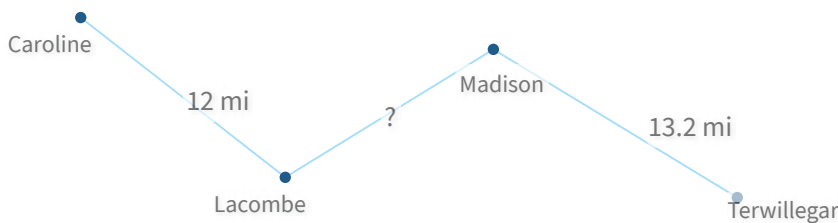


mi

Show your work

#6

Using the paths shown, the distance from Caroline to Terwillegar is 36.5 mi. How far is it from Lacombe to Madison?



- 12.7 mi
- 9.7 mi
- 9.9 mi
- 11.3 mi

Show your work

#7

Using the paths shown, how long is the shortest route from Lethbridge to Red Deer?

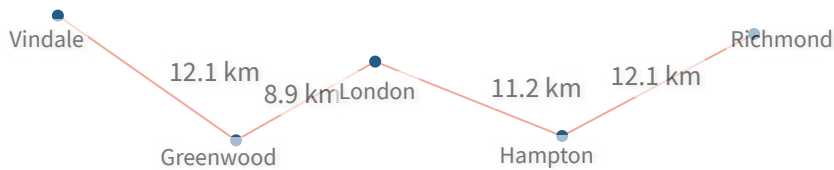


km

Show your work

#8

Using the paths shown, how far is it from Greenwood to Hampton?

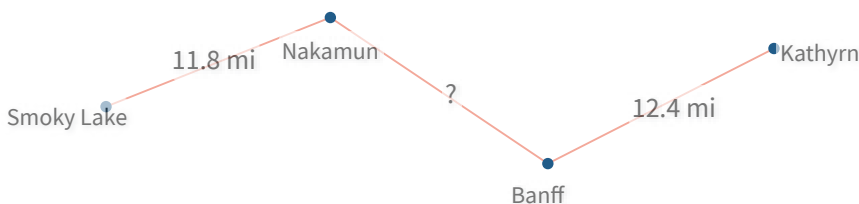


km

Show your work

#9

Using the paths shown, the distance from Smoky Lake to Kathryn is 37 mi. How far is it from Nakamun to Banff?

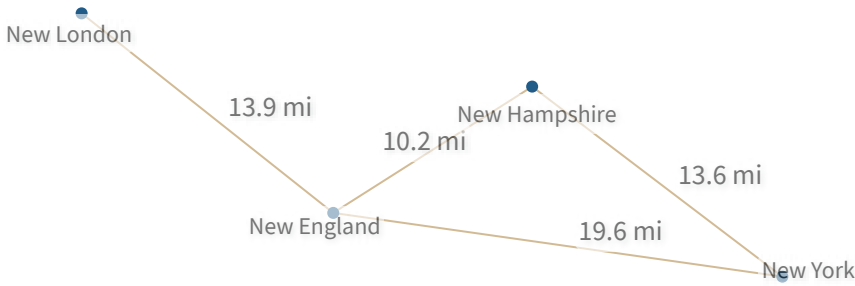


- 13.6 mi
- 12.3 mi
- 12.8 mi
- 14.6 mi

Show your work

#10

Using the paths shown, how long is the shortest route from New London to New York?



mi

Show your work

#11

Using the paths shown, how long is the shortest route from Victoria to Sunnyville?



mi

Show your work

#12

Using the paths shown, how far is it from Vindale to London?



- 20.5 km
- 27.2 km
- 29.6 km
- 19.9 km

Show your work

Question	Answer
#1	choice 3
#2	41.2
#3	choice 1
#4	choice 4
#5	9.9
#6	choice 4
#7	26.9
#8	20.1
#9	choice 3
#10	33.5
#11	37.6
#12	choice 2