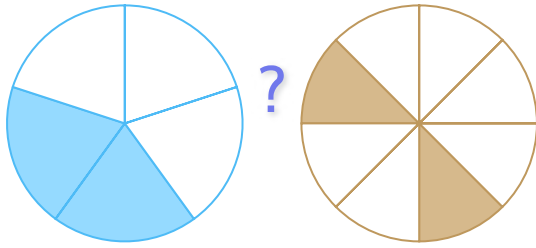


#1

Which sign makes the sentence true?

$\frac{2}{5}$

$\frac{2}{8}$



= < >

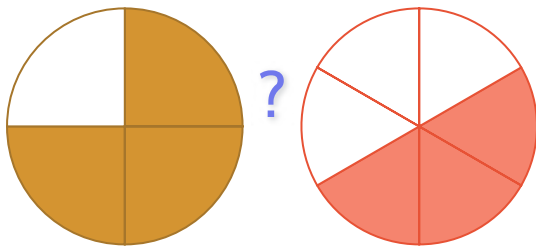
Show your work

#2

Which sign makes the sentence true?

$\frac{3}{4}$

$\frac{3}{6}$



> < =

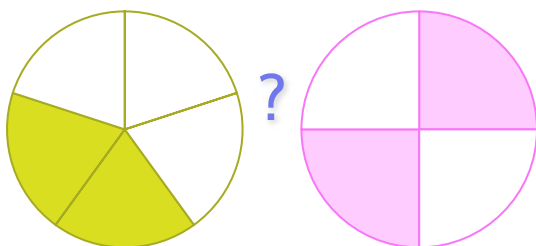
Show your work

#3

Which sign makes the sentence true?

$\frac{2}{5}$

$\frac{1}{4}$



= < >

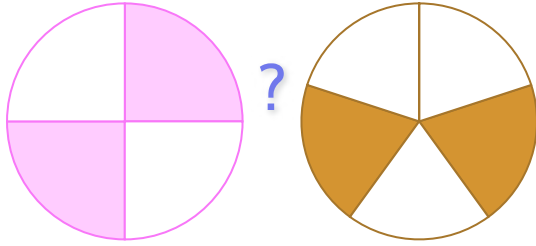
Show your work

#4

Which sign makes the sentence true?

$$\frac{2}{4}$$

$$\frac{2}{5}$$



> = <

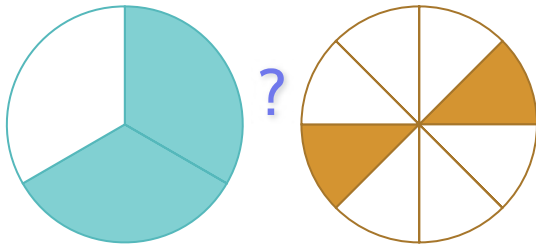
Show your work

#5

Which sign makes the sentence true?

$$\frac{2}{3}$$

$$\frac{2}{8}$$



> < =

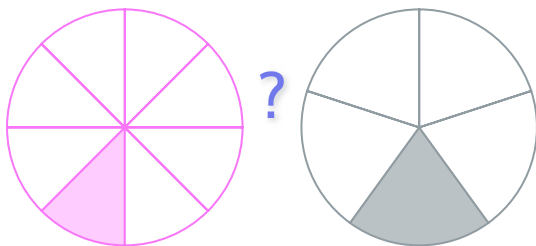
Show your work

#6

Which sign makes the sentence true?

$$\frac{2}{8}$$

$$\frac{1}{5}$$



= > <

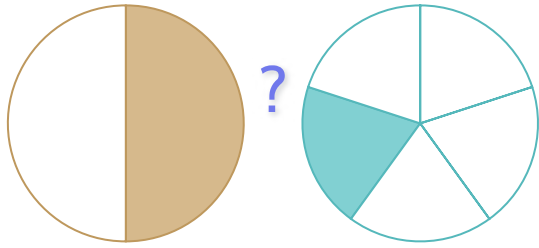
Show your work

#7

Which sign makes the sentence true?

$\frac{1}{2}$

$\frac{1}{5}$



= < >

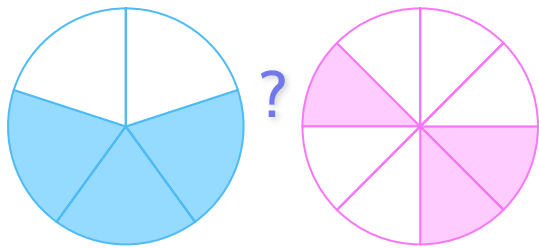
Show your work

#8

Which sign makes the sentence true?

$\frac{3}{5}$

$\frac{3}{8}$



= > <

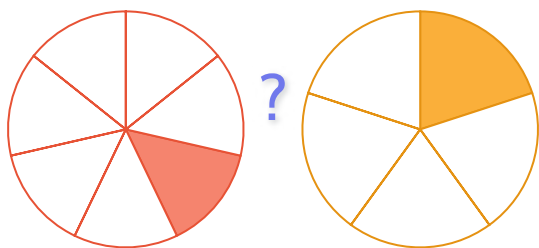
Show your work

#9

Which sign makes the sentence true?

$\frac{2}{7}$

$\frac{2}{5}$



< > =

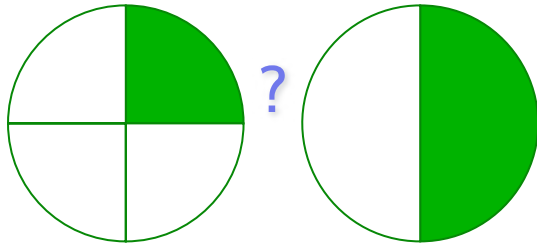
Show your work

#10

Which sign makes the sentence true?

$$\frac{1}{4}$$

$$\frac{1}{2}$$



< > =


Show your work

#11

Which sign makes the sentence true?

$$\frac{1}{2}$$

$$\frac{1}{2}$$



> < =

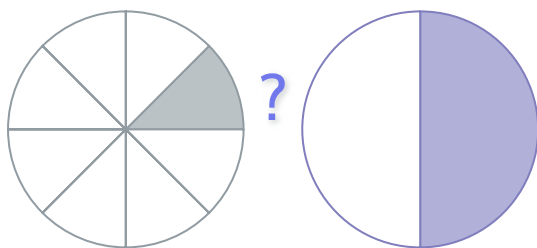
Show your work

#12

Which sign makes the sentence true?

$$\frac{1}{8}$$

$$\frac{1}{2}$$



< = >

Show your work

Question	Answer
#1	choice 3
#2	choice 1
#3	choice 2
#4	choice 1
#5	choice 1
#6	choice 3
#7	choice 3
#8	choice 2
#9	choice 1
#10	choice 1
#11	choice 3
#12	choice 1