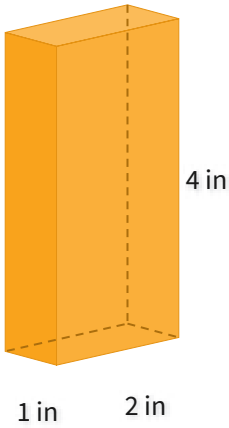


#1

What is the volume?

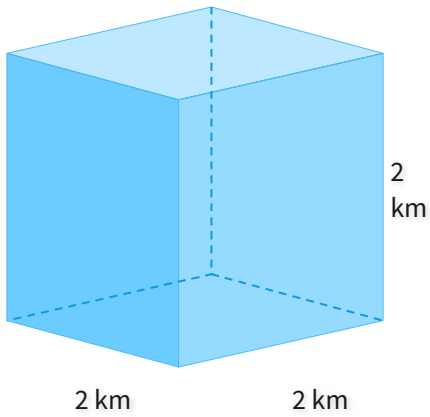


cubic in

Show your work

#2

What is the volume?

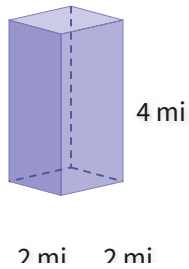


cubic km

Show your work

#3

What is the volume?

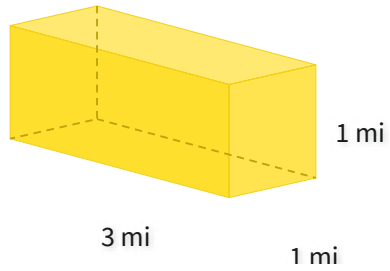


- 11 cubic mi
- 17 cubic mi
- 21 cubic mi
- 16 cubic mi

Show your work

#4

What is the volume?

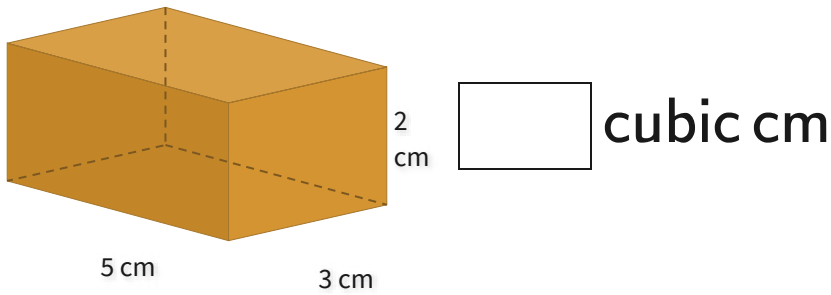


- 6 cubic mi
- 2 cubic mi
- 1 cubic mi
- 3 cubic mi

Show your work

#5

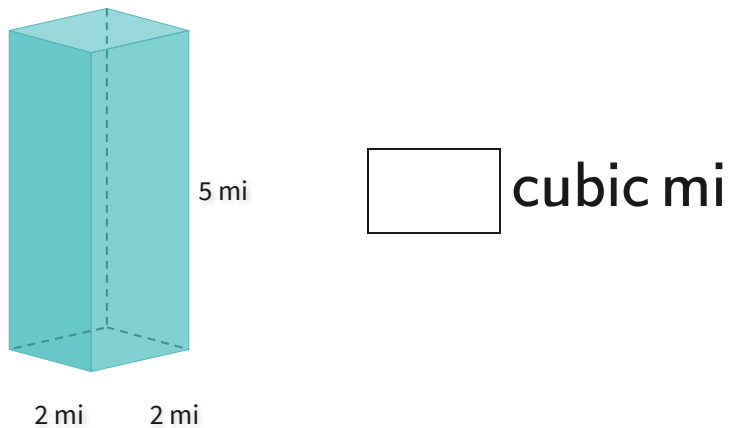
What is the volume?



Show your work

#6

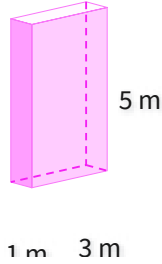
What is the volume?



Show your work

#7

What is the volume?

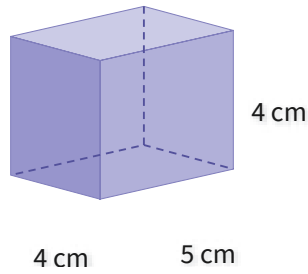


- 15 cubic m
- 16 cubic m
- 11 cubic m
- 17 cubic m

Show your work

#8

What is the volume?

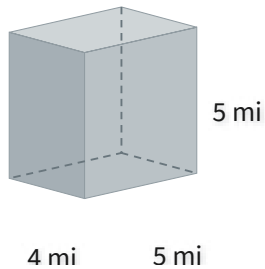


- 57 cubic cm
- 84 cubic cm
- 80 cubic cm
- 69 cubic cm

Show your work

#9

What is the volume?

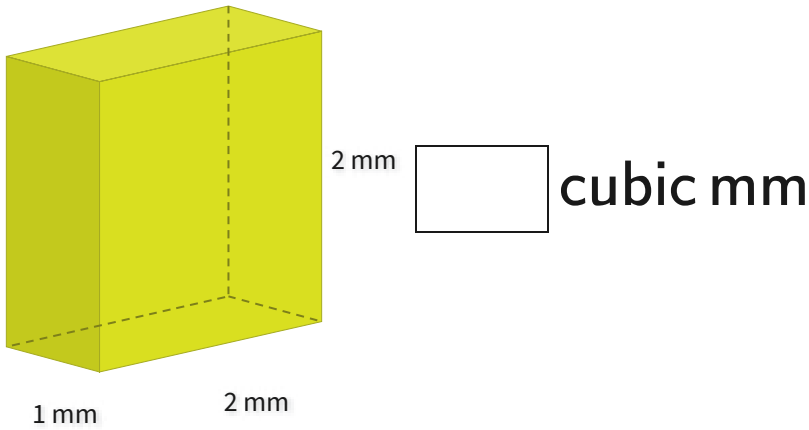


- 77 cubic mi
- 114 cubic mi
- 100 cubic mi
- 82 cubic mi

Show your work

#10

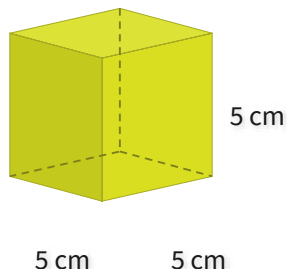
What is the volume?



Show your work

#11

What is the volume?

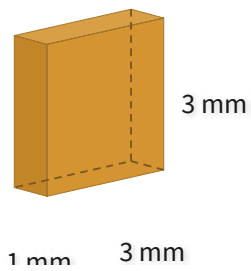


- 158 cubic cm
- 125 cubic cm
- 106 cubic cm
- 116 cubic cm

Show your work

#12

What is the volume?



- 9 cubic mm
- 10 cubic mm
- 12 cubic mm
- 6 cubic mm

Show your work

Question	Answer
#1	8
#2	8
#3	choice 4
#4	choice 4
#5	30
#6	20
#7	choice 1
#8	choice 3
#9	choice 3
#10	4
#11	choice 2
#12	choice 1