

#1

What is the surface area?



square m

#2


What is the surface area?



square m

#3

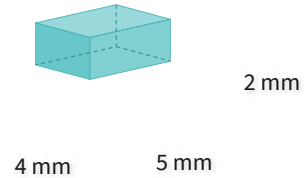
What is the surface area?



square cm

#4

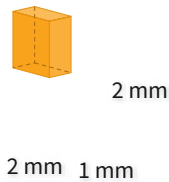
What is the surface area?



square mm

#5

What is the surface area?



square mm

#6

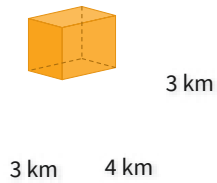
What is the surface area?



square ft

#7

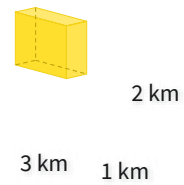
What is the surface area?



square km

#8

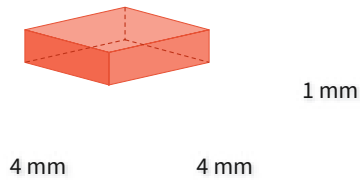
What is the surface area?



square km

#9

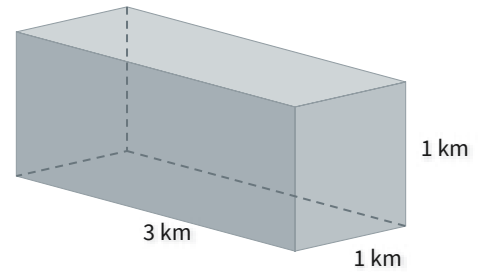
What is the surface area?



square mm

#10

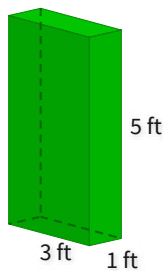
What is the surface area?



- 13 square km
- 14 square km
- 19 square km
- 10 square km

#11

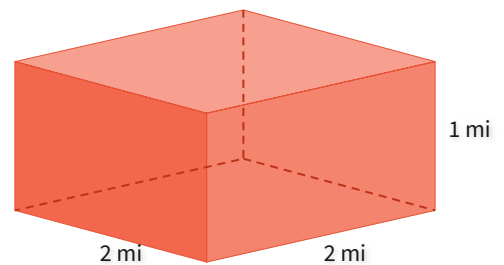
What is the surface area?



- 38 square ft
- 56 square ft
- 46 square ft
- 34 square ft

#12

What is the surface area?



- 15 square mi
- 12 square mi
- 11 square mi
- 16 square mi

Question	Answer
#1	76
#2	48
#3	62
#4	76
#5	16
#6	14
#7	66
#8	22
#9	48
#10	choice 2
#11	choice 3
#12	choice 4