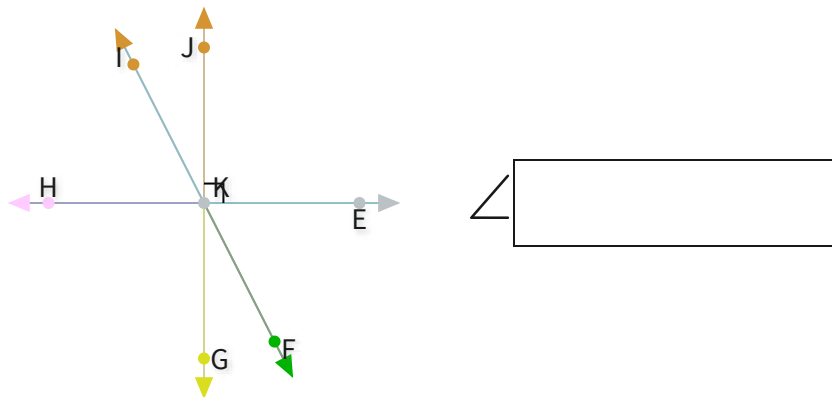


#1

Which angle is adjacent to  $\angle FKH$ ?

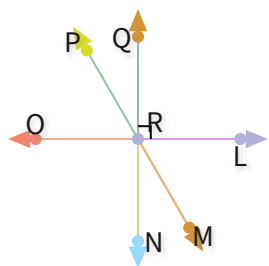


$\angle$

Show your work

#2

Select all angles that are complementary to  $\angle LRM$ .

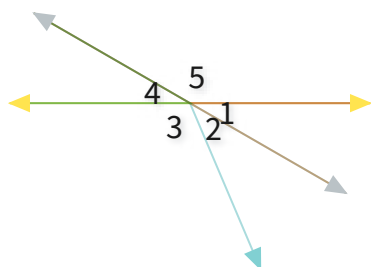


- |                       |              |                       |              |
|-----------------------|--------------|-----------------------|--------------|
| <input type="radio"/> | $\angle PRQ$ | <input type="radio"/> | $\angle QRL$ |
| <input type="radio"/> | $\angle MRN$ | <input type="radio"/> | $\angle ORP$ |

Show your work

#3

Select all angles that are supplementary to  $\angle 5$ .



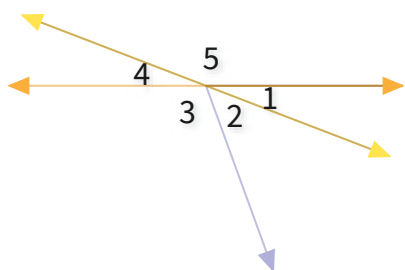
- |                       |            |                       |            |
|-----------------------|------------|-----------------------|------------|
| <input type="radio"/> | $\angle 1$ | <input type="radio"/> | $\angle 2$ |
| <input type="radio"/> | $\angle 3$ | <input type="radio"/> | $\angle 4$ |

Show your work



#4

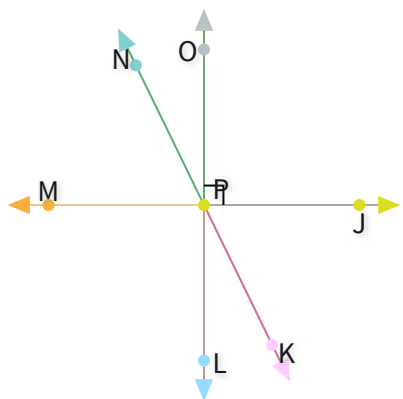
Which angle is supplementary to  $\angle 1$ ?



Show your work

#5

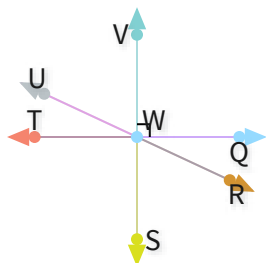
Which angle is complementary to  $\angle JPK$ ?



Show your work

#6

Select all angles that are vertical to  $\angle RWT$ .

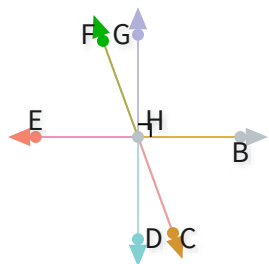
☐ $\angle UWQ$ ☐ $\angle RWS$ ☐ $\angle UWV$ ☐ $\angle VWQ$ 

Show your work



#7

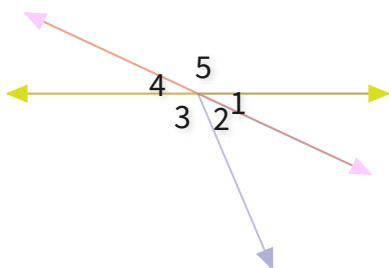
Select all angles that are supplementary to  $\angle BHC$ .

☐ $\angle DHE$ ☐ $\angle CHE$ ☐ $\angle CHD$ ☐ $\angle GHB$ 

Show your work

#8

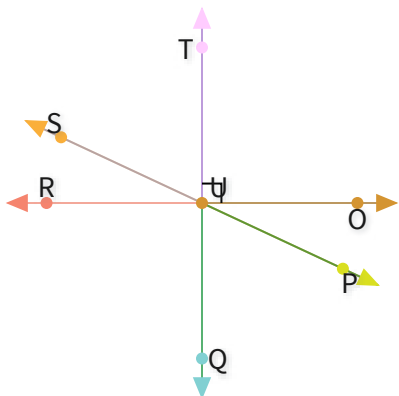
Select all angles that are congruent to  $\angle 1$ .

☐ $\angle 3$ ☐ $\angle 5$ ☐ $\angle 4$ ☐ $\angle 2$ 

Show your work

#9

Which angle is complementary to  $\angle OUP$ ?

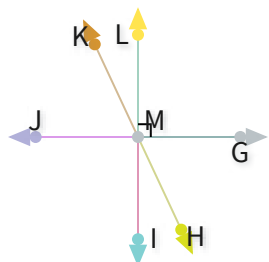


Show your work



#10

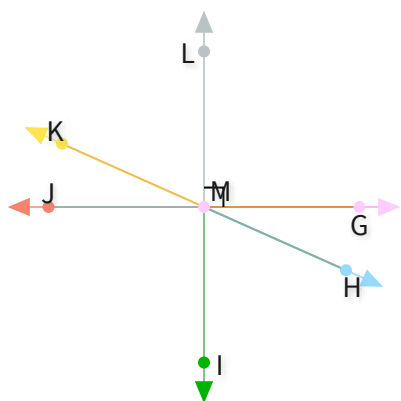
Select all angles that are adjacent to  $\angle GMI$ .

☐ $\angle JMI$ ☐ $\angle HMI$ ☐ $\angle GMH$ ☐ $\angle LMG$ 

Show your work

#11

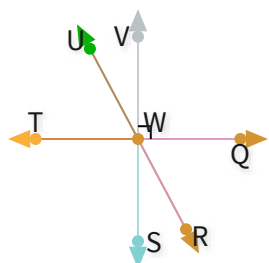
Which angle is supplementary to  $\angle GMH$ ?



Show your work

#12

Select all angles that are supplementary to  $\angle RWT$ .

☐ $\angle SWT$ ☐ $\angle QWR$ ☐ $\angle TWV$ ☐ $\angle VWQ$ 

Show your work



Question	Answer
#1	EKF or HKI or EKF or JKF or HKJ
#2	choice 3, choice 1
#3	choice 1, choice 4
#4	5
#5	KPL or NPO
#6	choice 1
#7	choice 2
#8	choice 3
#9	PUQ or SUT
#10	choice 4, choice 1
#11	HMJ or KMG
#12	choice 2