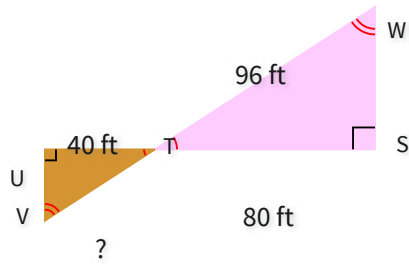


#1

What is the missing length?



☐ 41 ft

☐ 35 ft

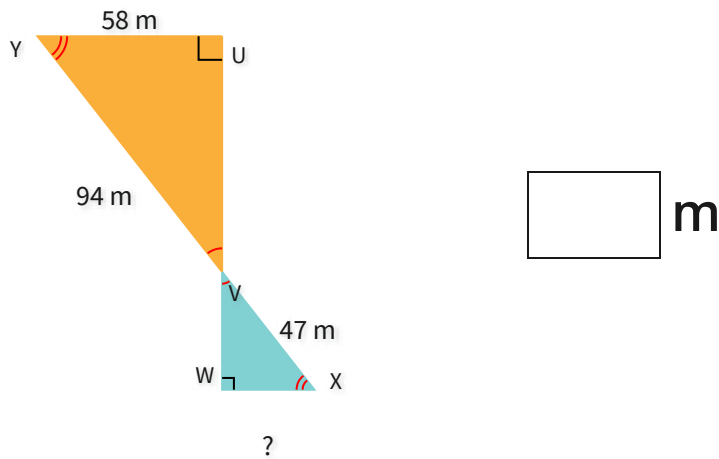
☐ 59 ft

☐ 48 ft

Show your work

#2

What is the missing length?

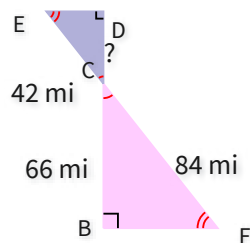


m

Show your work

#3

What is the missing length?



☐ 33 mi

☐ 27 mi

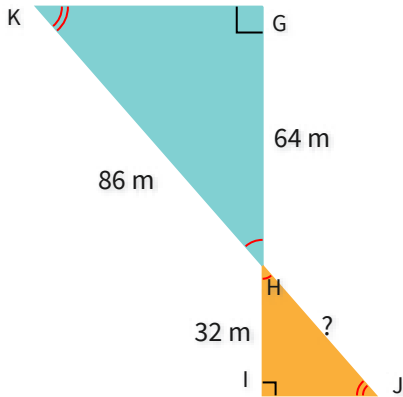
☐ 29 mi

☐ 40 mi

Show your work

#4

What is the missing length?

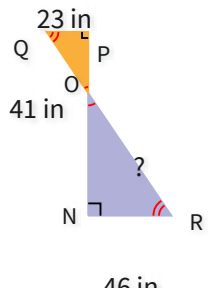


m

Show your work

#5

What is the missing length?



☐ 81 in

☐ 99 in

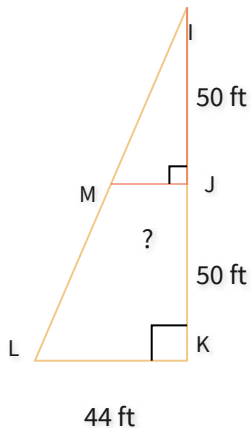
☐ 82 in

☐ 73 in

Show your work

#6

What is the missing length?

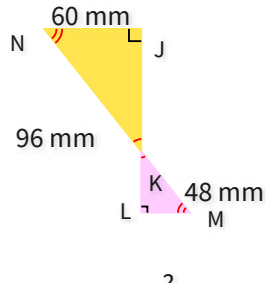


ft

Show your work

#7

What is the missing length?

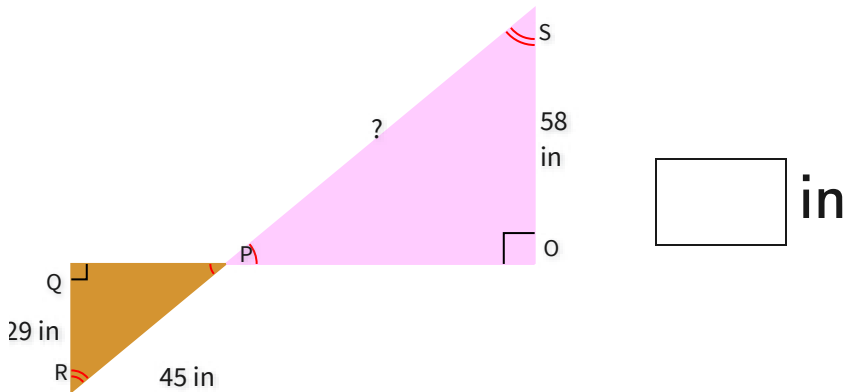


- ☐ 27 mm
 ☐ 30 mm
 ☐ 34 mm
 ☐ 23 mm

Show your work

#8

What is the missing length?

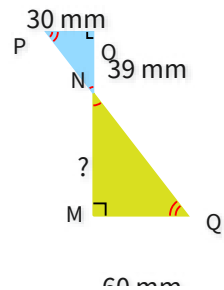


in

Show your work

#9

What is the missing length?

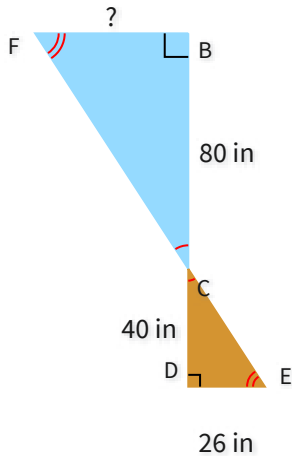


- ☐ 78 mm
 ☐ 85 mm
 ☐ 87 mm
 ☐ 80 mm

Show your work

#10

What is the missing length?

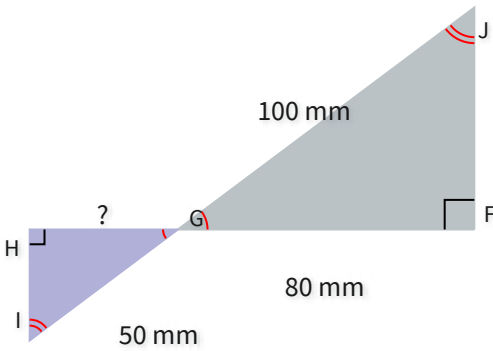


in

Show your work

#11

What is the missing length?

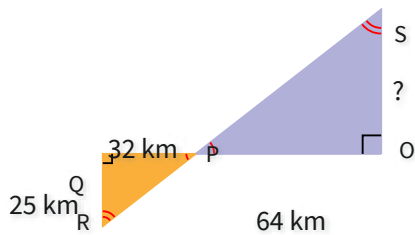


mm

Show your work

#12

What is the missing length?



- ☐ 50 km
 ☐ 45 km
- ☐ 55 km
 ☐ 63 km

Show your work

Question	Answer
#1	choice 4
#2	29
#3	choice 1
#4	43
#5	choice 3
#6	22
#7	choice 2
#8	90
#9	choice 1
#10	52
#11	40
#12	choice 1