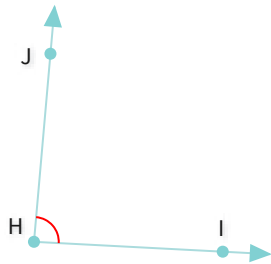




#1

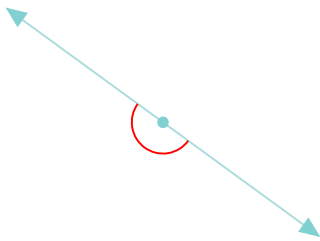
Select all correct names for the following angle:

☐ $\angle HJI$ ☐ $\angle IHJ$ ☐ $\angle HJ$ ☐ $\angle JIH$ 

Show your work

#2

Is this angle acute, right, obtuse, or straight?

☐

Straight

☐

Obtuse

☐

Acute

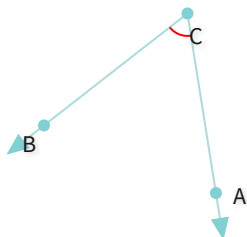
☐

Right

Show your work

#3

Select all correct names for the following angle:

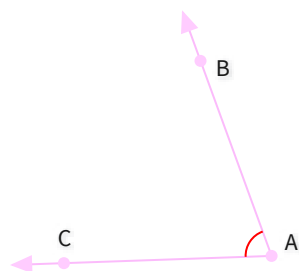
☐ $\angle ACB$ ☐ $\angle BCA$ ☐ $\angle BC$ ☐ $\angle ABC$ 

Show your work



#4

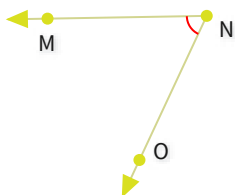
Select all correct names for the following angle:

☐ $\angle CBA$ ☐ $\angle BC$ ☐ $\angle BAC$ ☐ $\angle A$ 

Show your work

#5

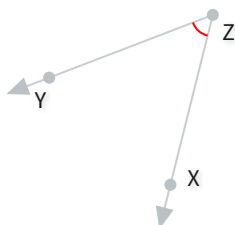
Select all correct names for the following angle:

☐ $\angle NMO$ ☐ $\angle ONM$ ☐ $\angle MN$ ☐ $\angle NOM$ 

Show your work

#6

Select all correct names for the following angle:

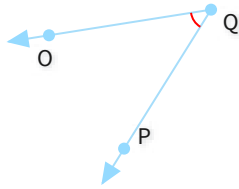
☐ $\angle ZYX$ ☐ $\angle ZXY$ ☐ $\angle YZX$ ☐ $\angle ZX$ 

Show your work



#7

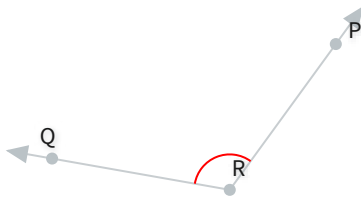
Select all correct names for the following angle:

☐ $\angle OP$ ☐ $\angle QP$ ☐ $\angle QPO$ ☐ $\angle PQO$ 

Show your work

#8

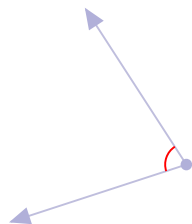
Select all correct names for the following angle:

☐ $\angle QRP$ ☐ $\angle PR$ ☐ $\angle RQP$ ☐ $\angle R$ 

Show your work

#9

Is this angle acute, right, obtuse, or straight?

☐

Obtuse

☐

Right

☐

Acute

☐

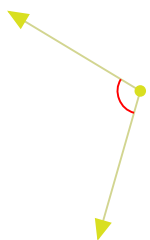
Straight

Show your work



#10

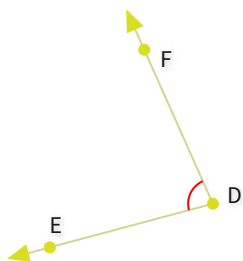
Is this angle acute, right, obtuse, or straight?

☐ Straight☐ Acute☐ Right☐ Obtuse

Show your work

#11

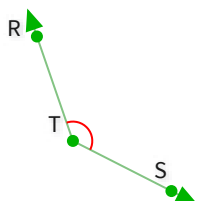
Select all correct names for the following angle:

 $\angle DFE$  $\angle F$  $\angle D$  $\angle FED$ 

Show your work

#12

Select all correct names for the following angle:

 $\angle ST$  $\angle TR$  $\angle SRT$  $\angle STR$ 

Show your work



Question	Answer
#1	choice 2
#2	choice 1
#3	choice 2, choice 1
#4	choice 4, choice 3
#5	choice 2
#6	choice 3
#7	choice 4
#8	choice 4, choice 1
#9	choice 3
#10	choice 4
#11	choice 3
#12	choice 4