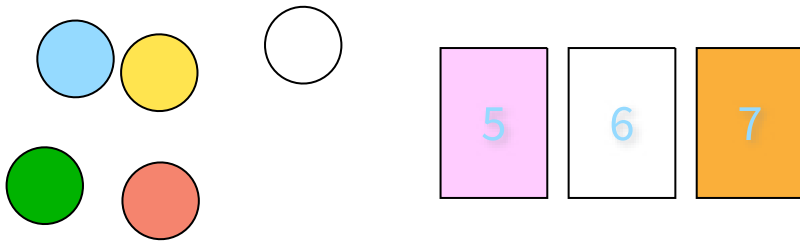


#1

You pick a marble and pick a card. How many outcomes are possible?

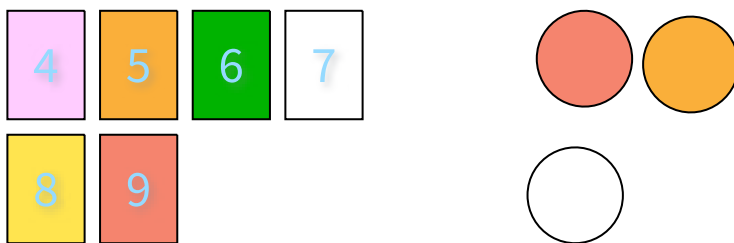


- ☐ 14 ☐ 12
☐ 19 ☐ 15

Show your work

#2

You pick a card and pick a marble. How many outcomes are possible?

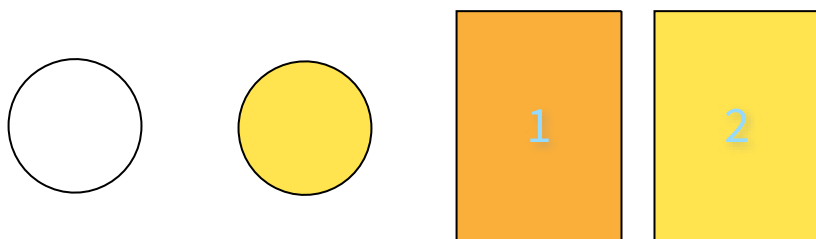


- ☐ 20 ☐ 18
☐ 24 ☐ 22

Show your work

#3

You pick a marble and pick a card. How many outcomes are possible?

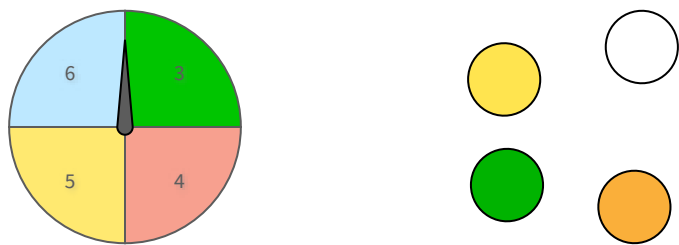


- ☐ 7 ☐ 2
☐ 1 ☐ 4

Show your work

#4

You spin a wheel and pick a marble. How many outcomes are possible?

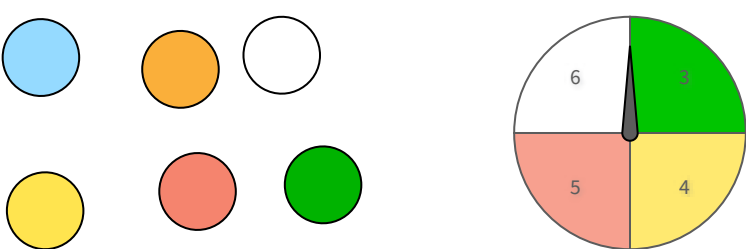


- ☐ 16
☐ 13
- ☐ 17
☐ 18

Show your work

#5

You pick a marble and spin a wheel. How many outcomes are possible?

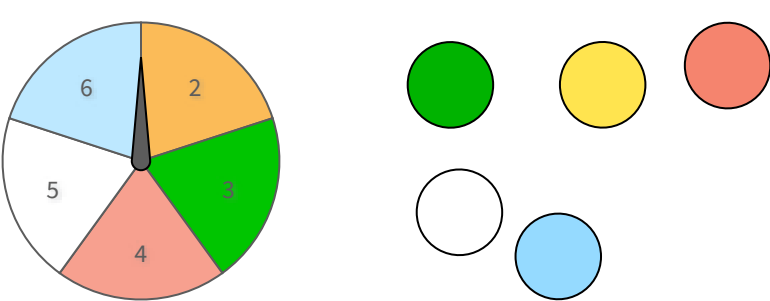


- ☐ 22
☐ 21
- ☐ 28
☐ 24

Show your work

#6

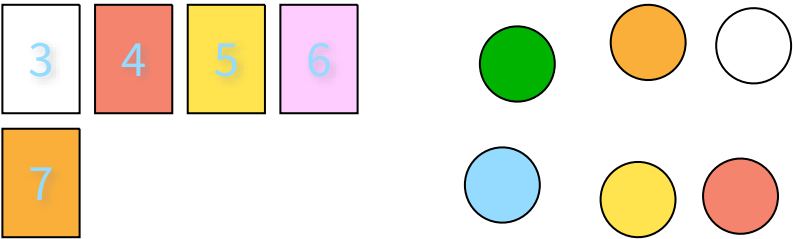
You spin a wheel and pick a marble. How many outcomes are possible?



Show your work

#7

You pick a card and pick a marble. How many outcomes are possible?

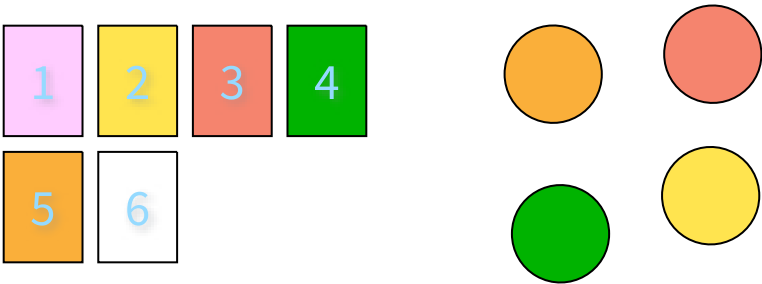


- ☐ 35
☐ 25
- ☐ 24
☐ 30

Show your work

#8

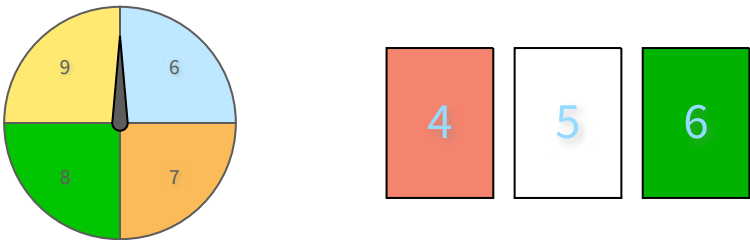
You pick a card and pick a marble. How many outcomes are possible?



Show your work

#9

You spin a wheel and pick a card. How many outcomes are possible?

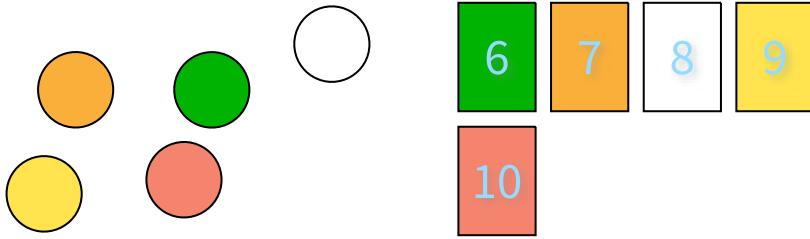


- ☐ 12
☐ 14
- ☐ 16
☐ 10

Show your work

#10

You pick a marble and pick a card. How many outcomes are possible?



☐ 20

☐ 31

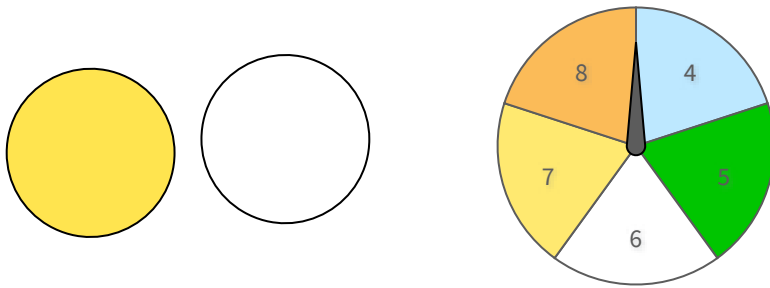
☐ 25

☐ 24

Show your work

#11

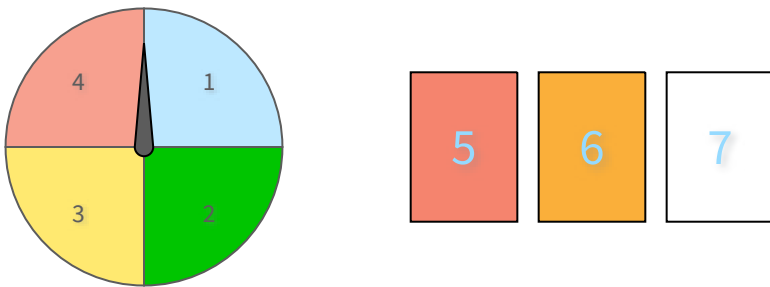
You pick a marble and spin a wheel. How many outcomes are possible?



Show your work

#12

You spin a wheel and pick a card. How many outcomes are possible?



Show your work

Question	Answer
#1	15
#2	18
#3	4
#4	16
#5	24
#6	25
#7	30
#8	24
#9	12
#10	25
#11	10
#12	12