




#1 If you look at this object from the left, which image will you see?





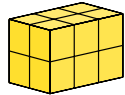
Show your work

#2 If you look at this object from the left, which image will you see?




Show your work


#3 If you look at this object from the left, which image will you see?



Show your work


#4 If you look at this object from the right, which image will you see?





Show your work


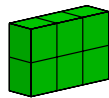
#5 If you look at this object from the top, which image will you see?





Show your work

#6 If you look at this object from the top, which image will you see?






Show your work

#7 If you look at this object from the right, which image will you see?






Show your work


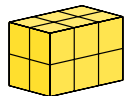
#8 If you look at this object from the top, which image will you see?






Show your work

#9 If you look at this object from the top, which image will you see?


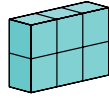




Show your work

#10


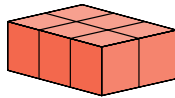
If you look at this object from the right, which image will you see?



Show your work

#11


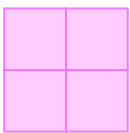
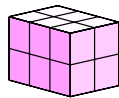
If you look at this object from the right, which image will you see?



Show your work

#12

If you look at this object from the left, which image will you see?



Show your work

Question	Answer
#1	choice 1
#2	choice 2
#3	choice 1
#4	choice 1
#5	choice 1
#6	choice 1
#7	choice 2
#8	choice 2
#9	choice 1
#10	choice 2
#11	choice 1
#12	choice 2