

#1

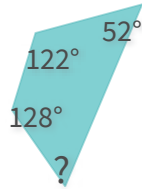
What is the measure of the missing angle?



Show your work

#2

What is the measure of the missing angle?



72°

59°

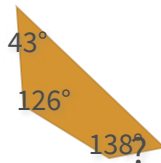
61°

58°

Show your work

#3

What is the measure of the missing angle?



55°

48°

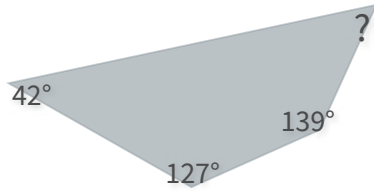
68°

53°

Show your work

#4

What is the measure of the missing angle?



36°

43°

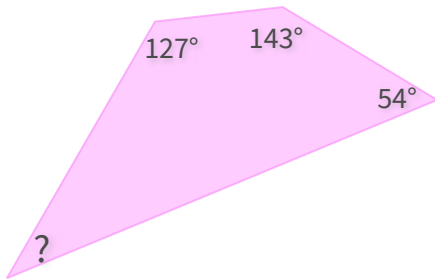
42°

52°

Show your work

#5

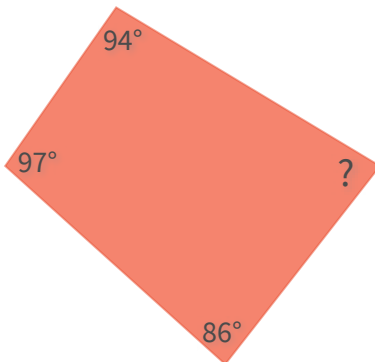
What is the measure of the missing angle?



Show your work

#6

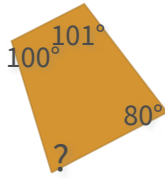
What is the measure of the missing angle?



Show your work

#7

What is the measure of the missing angle?



93°

102°


68°

79°

Show your work

#8

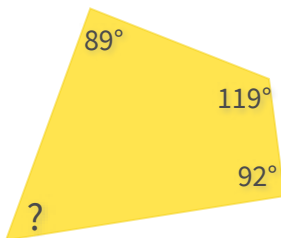
What is the measure of the missing angle?



Show your work

#9

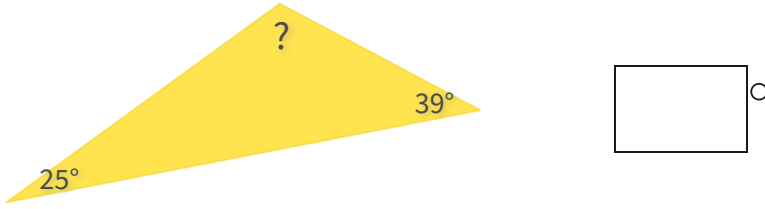
What is the measure of the missing angle?



Show your work

#10

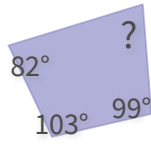
What is the measure of the missing angle?



Show your work

#11

What is the measure of the missing angle?

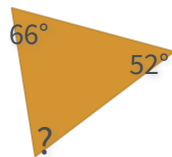


- 67°
- 85°
- 54°
- 76°

Show your work

#12

What is the measure of the missing angle?



- 56°
- 68°
- 62°
- 77°

Show your work

Question	Answer
#1	46
#2	choice 4
#3	choice 4
#4	choice 4
#5	36
#6	83
#7	choice 4
#8	116
#9	60
#10	116
#11	choice 4
#12	choice 2