



#1 What is the sum of the angle measures in this shape?





Show your work

#2 What is the sum of the angle measures in this shape?




Show your work

#3 What is the sum of the angle measures in this shape?




Show your work

#4 What is the sum of the angle measures in this shape?





Show your work

#5 What is the sum of the angle measures in this shape?



Show your work

#6 What is the sum of the angle measures in this shape?



Show your work


#7 What is the sum of the angle measures in this shape?



- 180°
- 270°
- 90°
- 360°

Show your work

#8 What is the sum of the angle measures in this shape?



- 720°
- 810°
- 540°
- 900°

Show your work

#9 What is the sum of the angle measures in this shape?



- 360°
- 270°
- 180°
- 90°

Show your work

#10 What is the sum of the angle measures in this shape?



Show your work

#11 What is the sum of the angle measures in this shape?



- 540°
- 720°
- 810°
- 990°

Show your work

#12 What is the sum of the angle measures in this shape?



- 540°
- 360°
- 270°
- 450°

Show your work

Question	Answer
#1	180
#2	540
#3	540
#4	360
#5	180
#6	360
#7	choice 1
#8	choice 1
#9	choice 1
#10	540
#11	choice 2
#12	choice 1