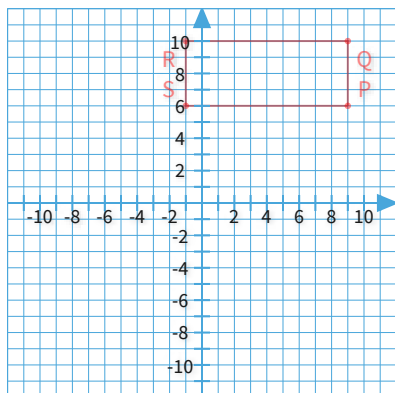




#1

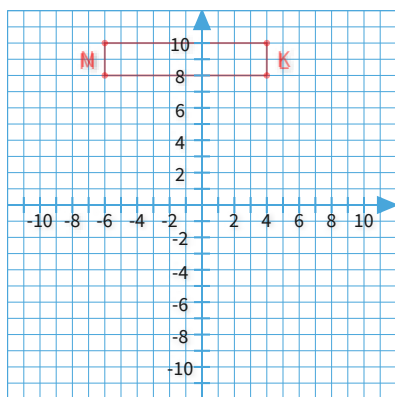
Graph the image of rectangle PQRS after a translation 15 units down.



Show your work

#2

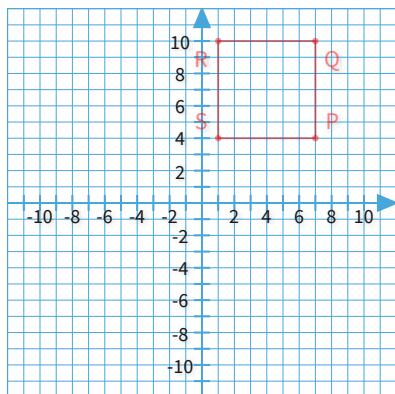
Graph the image of rectangle KLMN after a translation 7 units down.



Show your work

#3

Graph the image of rectangle PQRS after a translation 7 units down.

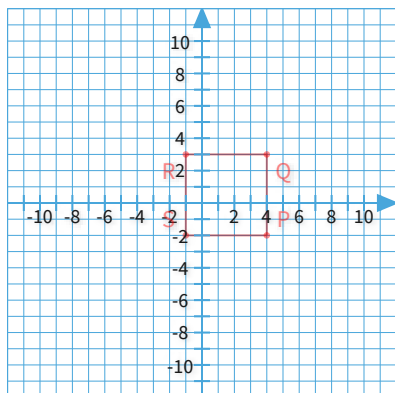


Show your work



#4

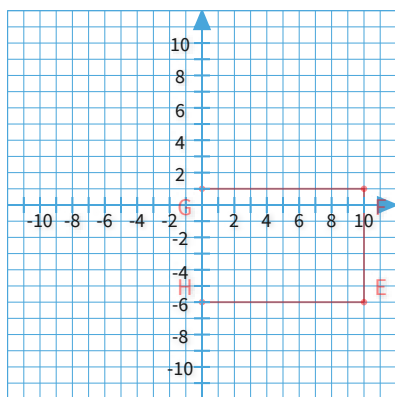
Graph the image of rectangle PQRS after a translation 6 units up.



Show your work

#5

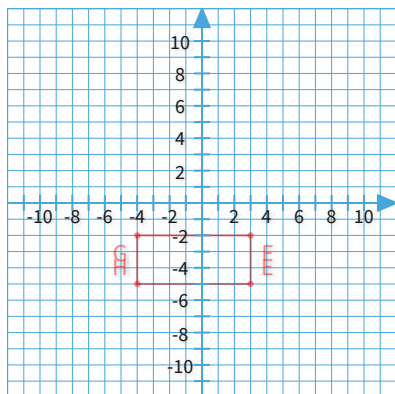
Graph the image of rectangle EFGH after a translation 7 units up.



Show your work

#6

Graph the image of rectangle EFGH after a translation 1 unit right.

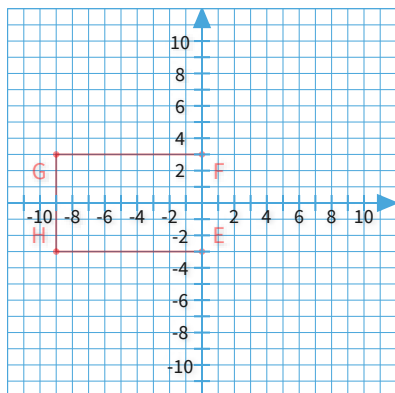


Show your work



#7

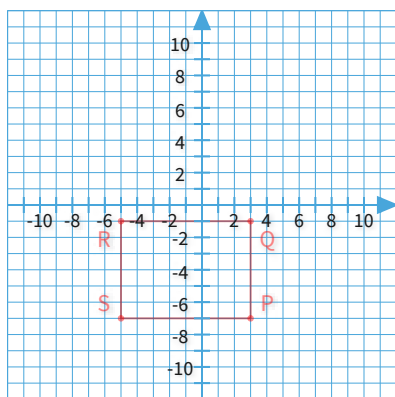
Graph the image of rectangle EFGH after a translation 1 unit left.



Show your work

#8

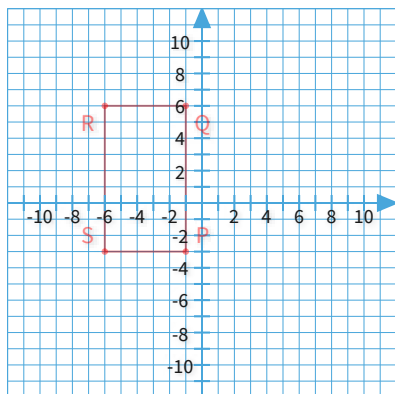
Graph the image of rectangle PQRS after a translation 1 unit up.



Show your work

#9

Graph the image of rectangle PQRS after a translation 4 units left.

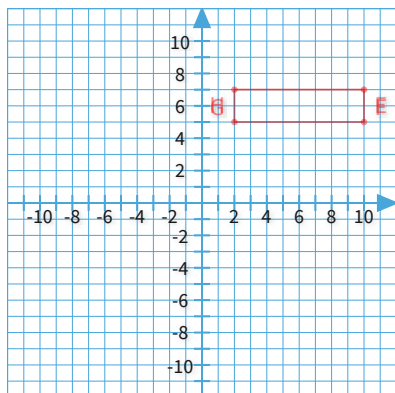


Show your work



#10

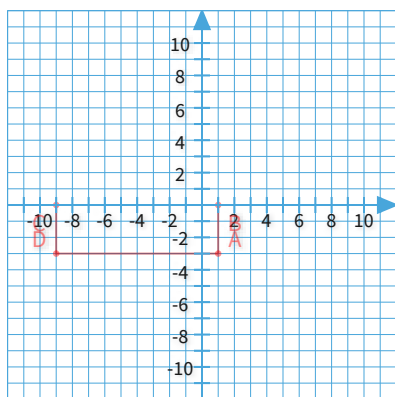
Graph the image of rectangle EFGH after a translation 4 units down.



Show your work

#11

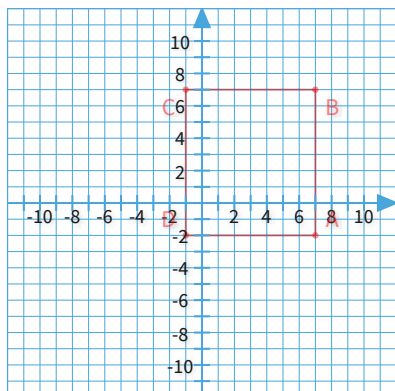
Graph the image of rectangle ABCD after a translation 3 units up.



Show your work

#12

Graph the image of rectangle ABCD after a translation 5 units down.



Show your work

Question	Answer
#1	-1,-9,9,-9,9,-5,-1,-5
#2	-6,1,4,1,4,3,-6,3
#3	1,-3,7,-3,7,3,1,3
#4	-1,4,4,4,4,9,-1,9
#5	0,1,10,1,10,8,0,8
#6	-3,-5,4,-5,4,-2,-3,-2
#7	-10,-3,-1,-3,-1,3,-10,3
#8	-5,-6,3,-6,3,0,-5,0
#9	-10,-3,-5,-3,-5,6,-10,6
#10	2,1,10,1,10,3,2,3
#11	-9,0,1,0,1,3,-9,3
#12	-1,-7,7,-7,7,2,-1,2