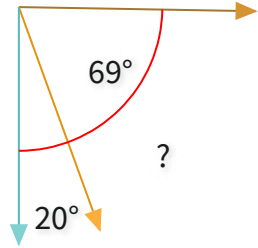




#1

What is the value of a missing angle?

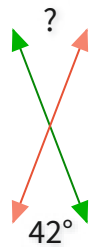


- 89°
- 102°
- 115°
- 108°

Show your work

#2

What is the value of a missing angle?

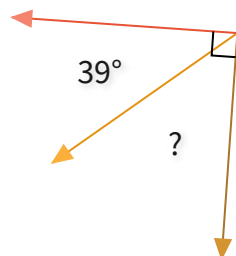


- 30°
- 42°
- 47°
- 32°

Show your work

#3

What is the value of a missing angle?



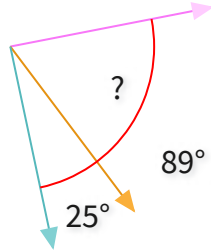
- 58°
- 40°
- 63°
- 51°

Show your work



#4

What is the value of a missing angle?



54°

83°

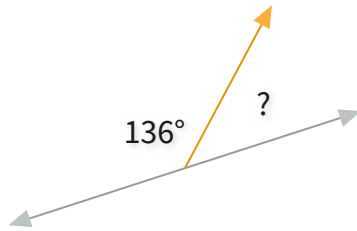
46°

64°

Show your work

#5

What is the value of a missing angle?



44°

36°

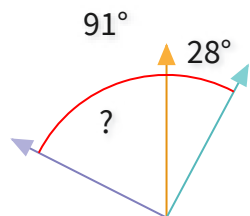
43°

52°

Show your work

#6

What is the value of a missing angle?



63°

77°

51°

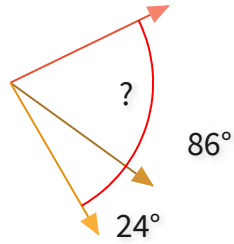
57°

Show your work



#7

What is the value of a missing angle?



74°

75°

62°

51°

Show your work

#8

What is the value of a missing angle?



36°

52°

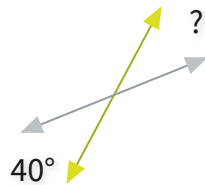
53°

66°

Show your work

#9

What is the value of a missing angle?



46°

40°

38°

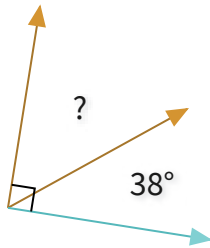
29°

Show your work



#10

What is the value of a missing angle?



67°

52°

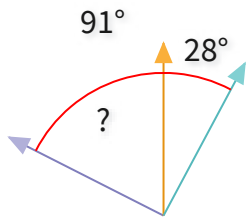
42°

59°

Show your work

#11

What is the value of a missing angle?



63°

77°

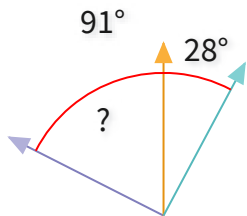
51°

57°

Show your work

#12

What is the value of a missing angle?



63°

77°

51°

57°

Show your work

Question	Answer
#1	choice 1
#2	choice 2
#3	choice 4
#4	choice 4
#5	choice 1
#6	choice 1
#7	choice 3
#8	choice 2
#9	choice 2
#10	choice 2
#11	choice 1
#12	choice 1