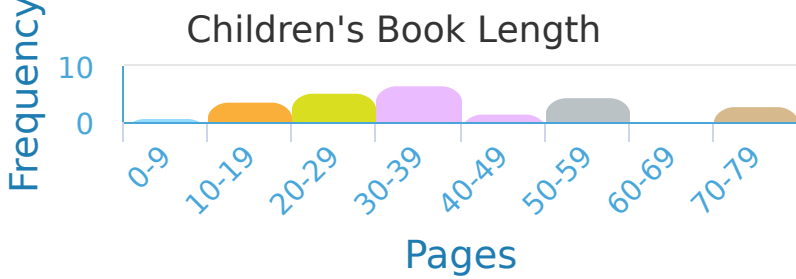


#1

Julia went through all her children's books and recorded how many pages they had. How many books had between 40 and 49 pages?

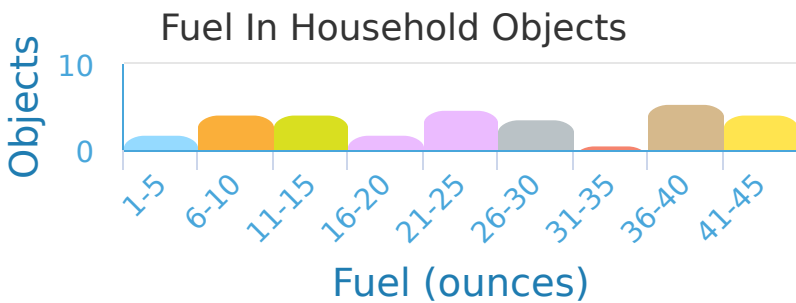


- 2
- 1
- 3
- 4

Show your work

#2

Jayden is planning for the apocalypse and is assessing how much fuel various objects in his house contain. If he has measured fuel in ounces, how many objects have fuel in them?

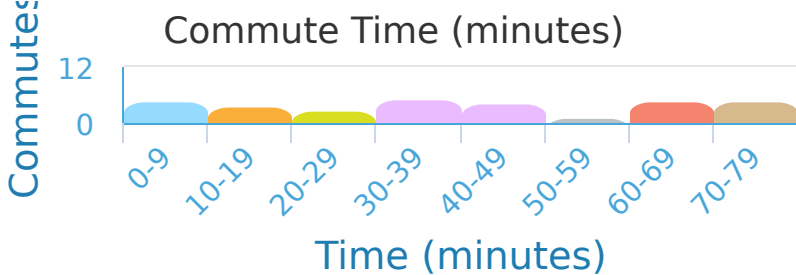


objects

Show your work

#3

A business magazine surveyed its readers about their commute times. How many commutes are between 50 and 59 minutes?

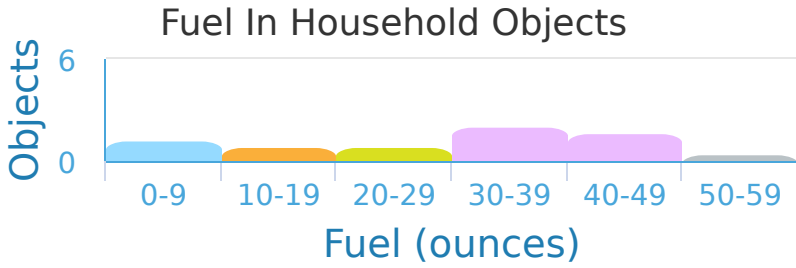


- 2 commutes
- 3 commutes
- 5 commutes
- 1 commutes

Show your work

#4

Ava is planning for the apocalypse and is assessing how much fuel various objects in her house contain. If she has measured fuel in ounces, what is the most common amount of fuel an object contains?



- 10–19
- 40–49
- 0–9
- 30–39

Show your work

#5

In Minecraft it takes various amount of wood to make different objects. What is the most common amount of wood to use to make an object?

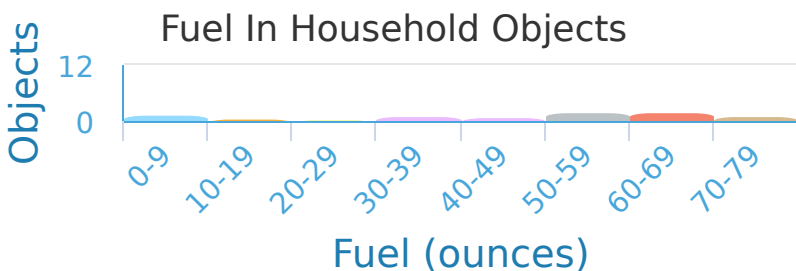


- 0–9
- 30–39
- 50–59
- 40–49

Show your work

#6

Dylan is planning for the apocalypse and is assessing how much fuel various objects in his house contain. If he has measured fuel in ounces, how many objects have between 0 and 9 ounces of fuel?

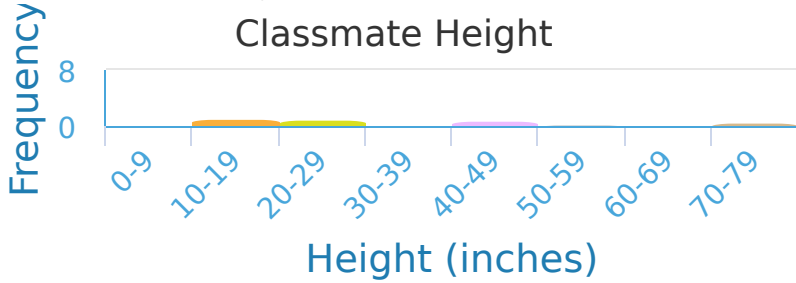


- 4
- 9
- 7
- 6

Show your work

#7

As part of a project Savannah measures the height of everyone in her class. How many students are between 50 and 59 inches tall?




- 2
- 1
- 3
- 4

Show your work

#8

In Minecraft it takes various amount of wood to make different objects. How many objects are made out of wood?

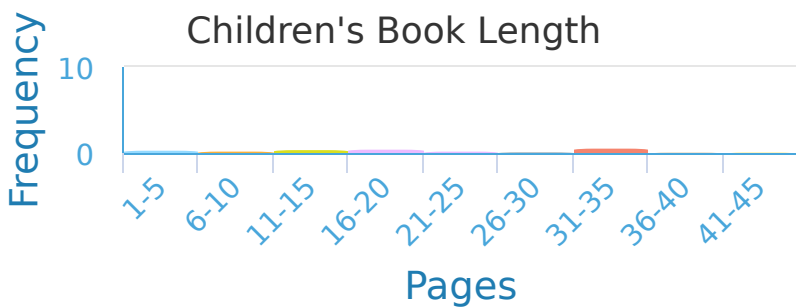


- 59
- 60
- 48
- 39

Show your work

#9

Emily went through all her children's books and recorded how many pages they had. How many books did Emily look at?

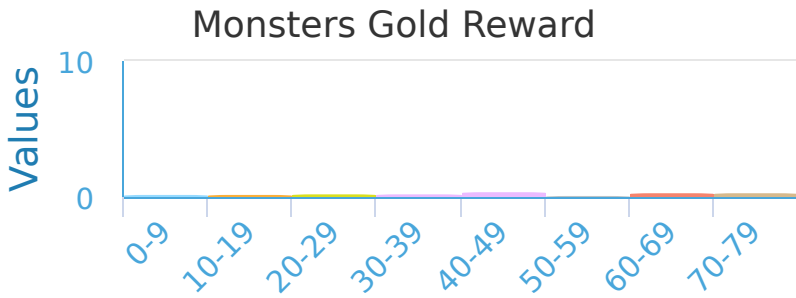


books

Show your work

#10

In a video game gold is rewarded for killing monsters. How many monsters are worth between 10 and 19?

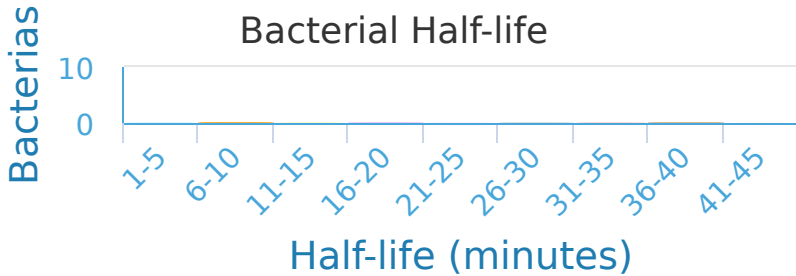


monsters

Show your work

#11

A grad student makes the table below while recording bacterial half-lives. How many bacteria did the student research?

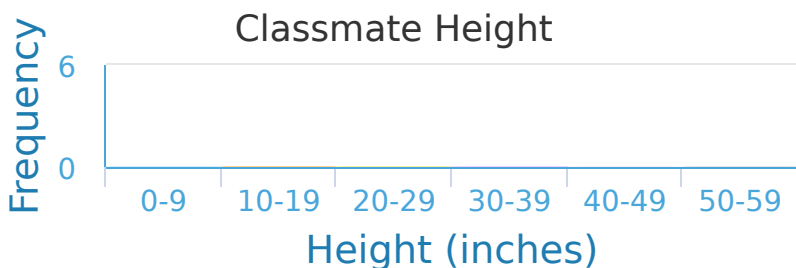


- 52
- 41
- 45
- 43

Show your work

#12

As part of a project Landon measures the height of everyone in his class. What was the most common height?



- 0-9
- 40-49
- 50-59
- 30-39

Show your work

Question	Answer
#1	choice 1
#2	51
#3	choice 1
#4	choice 4
#5	choice 1
#6	choice 3
#7	choice 2
#8	choice 3
#9	37
#10	4
#11	choice 2
#12	choice 4