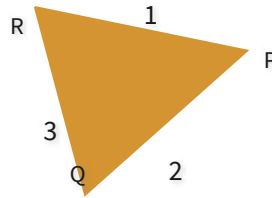
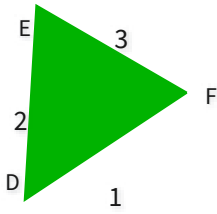




#1

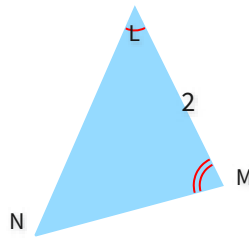
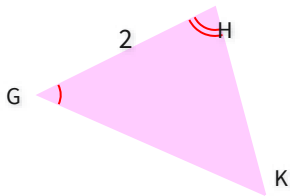
Which rule explains why these triangles are congruent?

☐ ASA☐ SAS☐ SSS☐ None

Show your work

#2

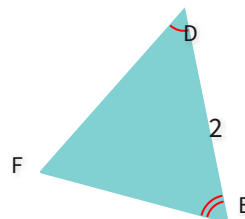
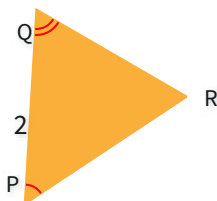
Which rule explains why these triangles are congruent?

☐ SAS☐ ASA☐ SSS☐ None

Show your work

#3

Which rule explains why these triangles are congruent?

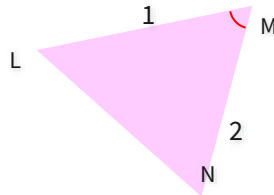
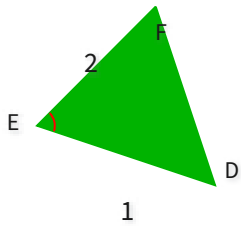
☐ None☐ SSS☐ ASA☐ SAS

Show your work



#4

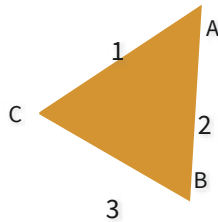
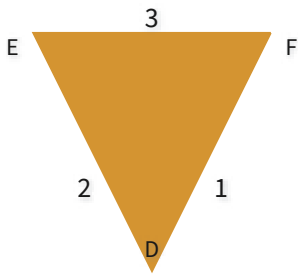
Which rule explains why these triangles are congruent?

☐ None☐ SSS☐ ASA☐ SAS

Show your work

#5


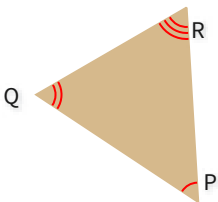
Which rule explains why these triangles are congruent?

☐ ASA☐ None☐ SAS☐ SSS

Show your work

#6

Which rule explains why these triangles are congruent?

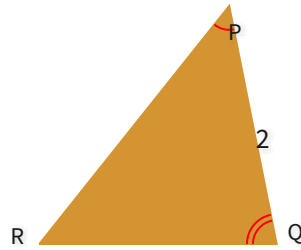
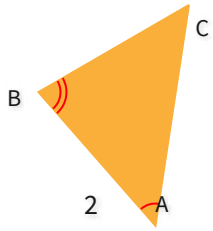
☐ SSS☐ SAS☐ None☐ ASA

Show your work



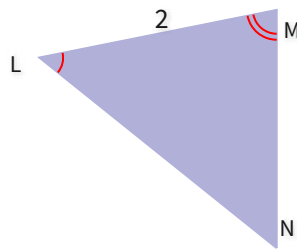
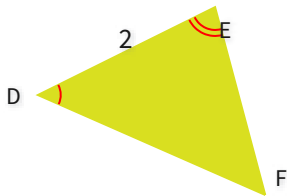
#7

Which rule explains why these triangles are congruent?

☐ SAS☐ ASA☐ SSS☐ None[Show your work](#)

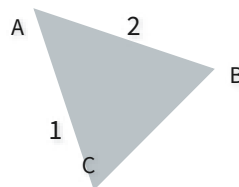
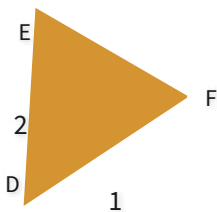
#8

Which rule explains why these triangles are congruent?

☐ None☐ SAS☐ ASA☐ SSS[Show your work](#)

#9

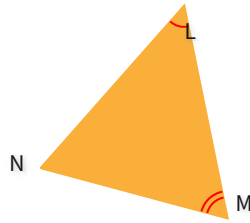
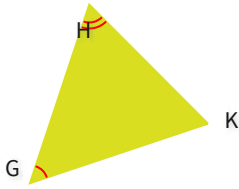
Which rule explains why these triangles are congruent?

☐ None☐ SSS☐ ASA☐ SAS[Show your work](#)



#10

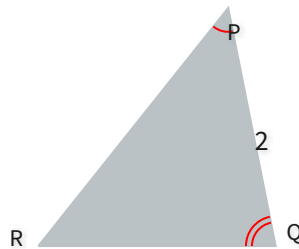
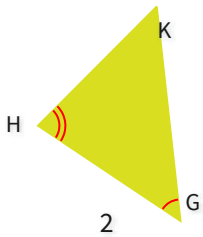
Which rule explains why these triangles are congruent?

☐ ASA☐ None☐ SAS☐ SSS

Show your work

#11

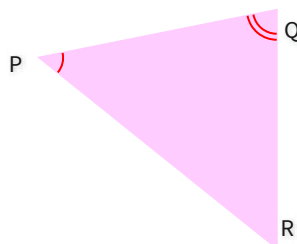
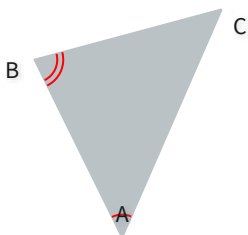
Which rule explains why these triangles are congruent?

☐ SAS☐ SSS☐ None☐ ASA

Show your work

#12

Which rule explains why these triangles are congruent?

☐ SSS☐ SAS☐ ASA☐ None

Show your work



Question	Answer
#1	choice 3
#2	choice 2
#3	choice 3
#4	choice 4
#5	choice 4
#6	choice 3
#7	choice 2
#8	choice 3
#9	choice 1
#10	choice 2
#11	choice 4
#12	choice 4