

#1

How many red apples are there? Count by tens.



Total:

Show your work

#2

How many oranges are there? Count by tens.



10

30


40

50

Show your work

#3

How many bananas are there? Count by tens.




Total:

Show your work

#4

How many red apples are there? Count by tens.




Total:

Show your work

#5

How many blocks are there? Count by tens.



Total:

Show your work

#6

How many bananas are there? Count by tens.



30

50


20

10

Show your work

#7


How many eggs are there? Count by tens.

 30 10 40 50

Show your work

#8

How many blocks are there? Count by tens.

 30 20 10 40

Show your work

#9

How many red apples are there? Count by tens.




Total:

Show your work

#10

How many blocks are there? Count by tens.



Total:

Show your work

#11

How many oranges are there? Count by tens.




Total:

Show your work

#12

How many eggs are there? Count by tens.



Total:

Show your work

Question	Answer
#1	30
#2	choice 1
#3	10
#4	20
#5	30
#6	choice 4
#7	choice 2
#8	choice 2
#9	10
#10	30
#11	10
#12	20