


#1

Which of these objects are shaped like a cube?



Show your work

#2


Which of these objects are shaped like a sphere?



Show your work

#3


Which of these objects are shaped like a cube?



Show your work

#4


Which of these objects are shaped like a cube?



Show your work

#5


Which of these objects are shaped like a cube?



Show your work

#6

Which of these objects are shaped like a cube?



Show your work

#7

Which of these objects are shaped like a cone?







Show your work

#8

Which of these objects are shaped like a cube?







Show your work

#9

Which of these objects are shaped like a sphere?








Show your work

#10


Which of these objects are shaped like a cone?



Show your work

#11

Which of these objects are shaped like a cylinder?



Show your work

#12

Which of these objects are shaped like a cylinder?



Show your work

| Question | Answer                       |
|----------|------------------------------|
| #1       | choice 1                     |
| #2       | choice 4, choice 1, choice 3 |
| #3       | choice 2, choice 3           |
| #4       | choice 4, choice 2, choice 3 |
| #5       | choice 3                     |
| #6       | choice 4, choice 1, choice 2 |
| #7       | choice 3, choice 4           |
| #8       | choice 4, choice 1, choice 3 |
| #9       | choice 3, choice 1, choice 2 |
| #10      | choice 2, choice 1, choice 3 |
| #11      | choice 1, choice 3, choice 2 |
| #12      | choice 3, choice 4           |