





#1




Which of the following objects is a triangle?



Show your work

#2




Which of the following objects is a octagon?



Show your work

#3

Which of the following objects is a rhombus?






Show your work



#4




Which of the following objects is a circle?



Show your work

#5




Which of the following objects is a rectangle?



Show your work

#6

Which of the following objects is a hexagon?






Show your work



#7




Which of the following objects is a hexagon?



Show your work

#8



Which of the following objects is a octagon?



Show your work

#9

Which of the following objects is a triangle?






Show your work



#10


Which of the following objects is a triangle?



Show your work

#11



Which of the following objects is a star?



Show your work

#12

Which of the following objects is a pentagon?



Show your work



Question	Answer
#1	choice 3
#2	choice 3
#3	choice 3
#4	choice 3
#5	choice 1
#6	choice 1
#7	choice 2
#8	choice 1
#9	choice 3
#10	choice 1
#11	choice 3
#12	choice 1