


#1 Select all objects that could be used to trace a rectangle.




Show your work

#2 Select all objects that could be used to trace a rectangle.



Show your work

#3 Select all objects that could be used to trace a rectangle.




Show your work

#4 Select all objects that could be used to trace a rectangle.



Show your work

#5 Select all objects that could be used to trace a rectangle.



Show your work

#6 Select all objects that could be used to trace a triangle.



Show your work

#7 Select all objects that could be used to trace a square.



Show your work

#8 Select all objects that could be used to trace a square.



Show your work

#9 Select all objects that could be used to trace a triangle.




Show your work

#10 Select all objects that could be used to trace a triangle.




Show your work

#11 Select all objects that could be used to trace a rectangle.



Show your work

#12 Select all objects that could be used to trace a triangle.



Show your work

Question	Answer
#1	choice 2, choice 3
#2	choice 3, choice 1
#3	choice 2, choice 1
#4	choice 1, choice 3
#5	choice 3, choice 1
#6	choice 3, choice 1, choice 2
#7	choice 2
#8	choice 2
#9	choice 1
#10	choice 3
#11	choice 2, choice 1
#12	choice 1, choice 3