



#1 Which objects have the same shape as this one.



Show your work

#2 Which objects have the same shape as this one.




Show your work

#3 Which objects have the same shape as this one.



Show your work

#4 Which objects have the same shape as this one.



Show your work

#5 Which objects have the same shape as this one.



Show your work

#6 Which objects have the same shape as this one.




Show your work

#7 Which objects have the same shape as this one.




Show your work

#8 Which objects have the same shape as this one.



Show your work

#9 Which objects have the same shape as this one.



Show your work

#10

Which objects have the same shape as this one.



Show your work

#11

Which objects have the same shape as this one.



Show your work

#12

Which objects have the same shape as this one.



Show your work

Question	Answer
#1	choice 4
#2	choice 2
#3	choice 3
#4	choice 4
#5	choice 2
#6	choice 4
#7	choice 2, choice 3
#8	choice 4, choice 3
#9	choice 4
#10	choice 4
#11	choice 3
#12	choice 2, choice 1