



#1

How many corners does this shape have?



5

4


7

1

Show your work

#2

How many sides does this shape have?



4

7

2

6

Show your work

#3

How many corners does this shape have?



6

4

7

2

Show your work



#4

How many corners does this shape have?



3

6


5

4

Show your work

#5

How many corners does this shape have?



8

4

9

6

Show your work

#6

How many sides does this shape have?



0

3

6


5

Show your work



#7

How many sides does this shape have?



1

5


2

4

Show your work

#8

How many sides does this shape have?



4

5


7

3

Show your work

#9

How many sides does this shape have?



4

3

6


1

Show your work



#10

How many corners does this shape have?



5

4

7

1

Show your work

#11

How many corners does this shape have?



7

5

4

1

Show your work

#12

How many sides does this shape have?



5

7

4

1

Show your work

Question	Answer
#1	4
#2	4
#3	4
#4	4
#5	6
#6	3
#7	4
#8	4
#9	4
#10	4
#11	4
#12	4