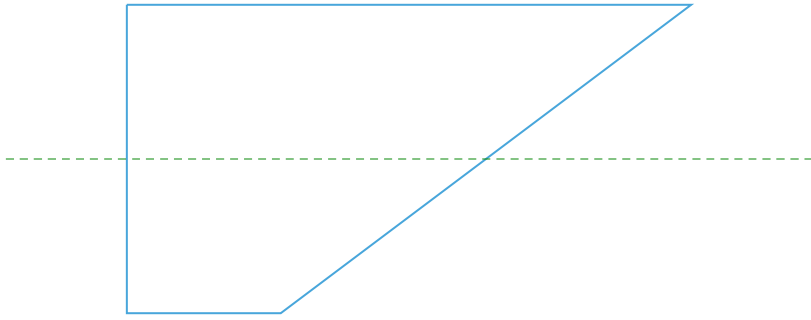




#1

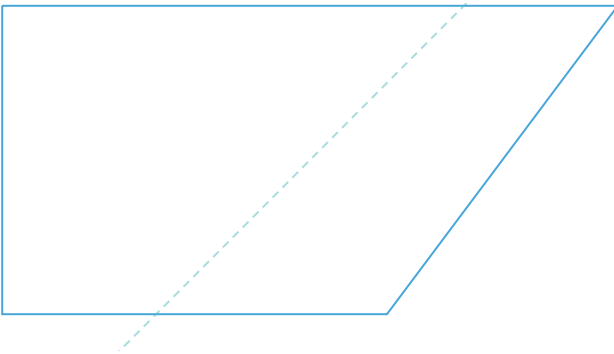
Is the dotted line a line of symmetry?

☐ Yes☐ No

Show your work

#2

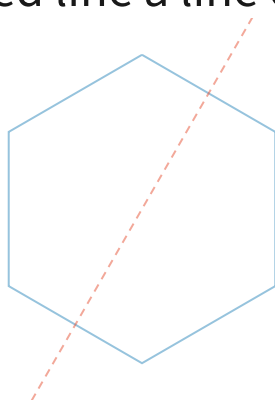
Is the dotted line a line of symmetry?

☐ No☐ Yes

Show your work

#3

Is the dotted line a line of symmetry?


☐ Yes☐ No

Show your work



#4


Is the dotted line a line of symmetry?

☐ Yes☐ No

Show your work

#5

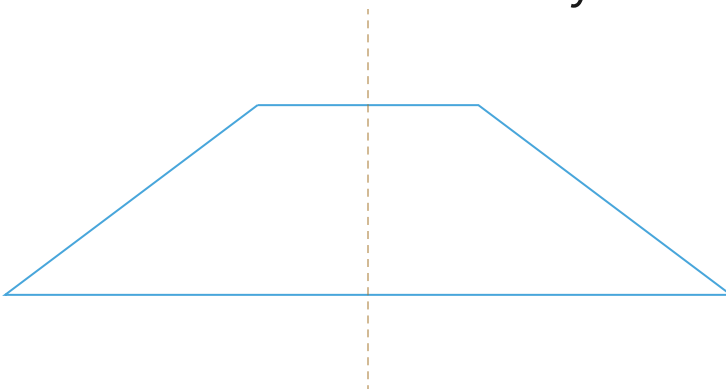
Is the dotted line a line of symmetry?

☐ No☐ Yes

Show your work

#6

Is the dotted line a line of symmetry?

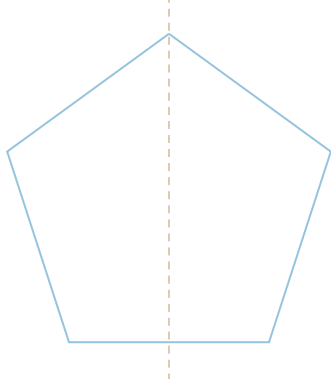
☐ Yes☐ No

Show your work



#7

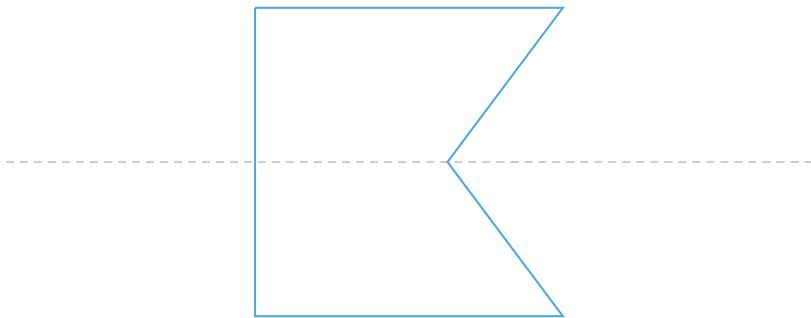
Is the dotted line a line of symmetry?

☐ Yes☐ No

Show your work

#8

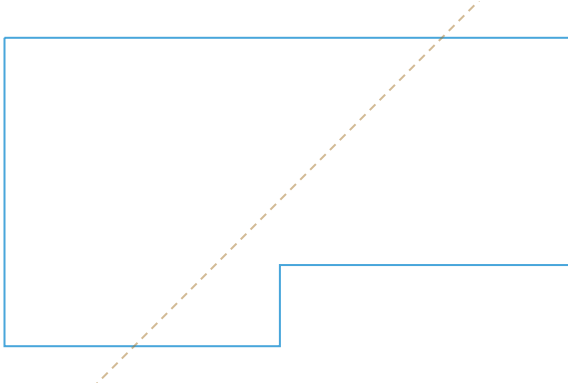
Is the dotted line a line of symmetry?

☐ Yes☐ No

Show your work

#9

Is the dotted line a line of symmetry?

☐ No☐ Yes

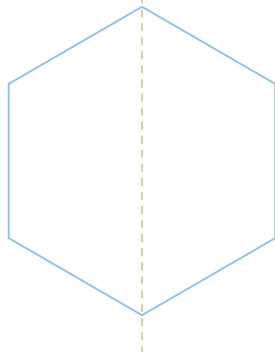
Show your work





#10


Is the dotted line a line of symmetry?

☐ No☐ Yes

Show your work

#11

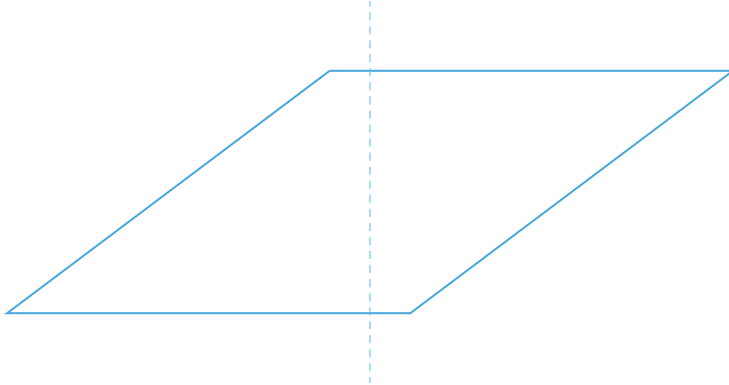
Is the dotted line a line of symmetry?

☐ Yes☐ No

Show your work

#12

Is the dotted line a line of symmetry?

☐ No☐ Yes

Show your work

Question	Answer
#1	choice 2
#2	choice 1
#3	choice 1
#4	choice 1
#5	choice 2
#6	choice 1
#7	choice 1
#8	choice 1
#9	choice 1
#10	choice 2
#11	choice 1
#12	choice 1