


#1

Which object is lighter?



Show your work

#2

Which object is lighter?



Show your work

#3

Which object is heavier?





Show your work



#4


Which object is lighter?



Show your work

#5


Which object is lighter?



Show your work

#6

Which object is heavier?



Show your work



#7


Which object is heavier?



Show your work

#8


Which object is lighter?



Show your work

#9

Which object is heavier?





Show your work



#10


Which object is heavier?



Show your work

#11


Which object is lighter?



Show your work

#12

Which object is lighter?



Show your work

Question	Answer
#1	choice 2
#2	choice 1
#3	choice 1
#4	choice 2
#5	choice 1
#6	choice 2
#7	choice 1
#8	choice 2
#9	choice 1
#10	choice 2
#11	choice 2
#12	choice 2