




#1


Which holds less?

☐☐

Show your work

#2


Which holds more?

☐☐

Show your work

#3

Which holds less?


☐☐

Show your work



#4

Which holds less?



Show your work

#5


Which holds more?



Show your work

#6

Which holds less?




Show your work



#7

Which holds more?



Show your work

#8


Which holds more?



Show your work

#9

Which holds less?



Show your work



#10



Which holds less?



Show your work

#11



Which holds less?



Show your work

#12

Which holds less?



Show your work



Question	Answer
#1	choice 2
#2	choice 2
#3	choice 1
#4	choice 1
#5	choice 2
#6	choice 2
#7	choice 2
#8	choice 2
#9	choice 2
#10	choice 1
#11	choice 1
#12	choice 2