


#1

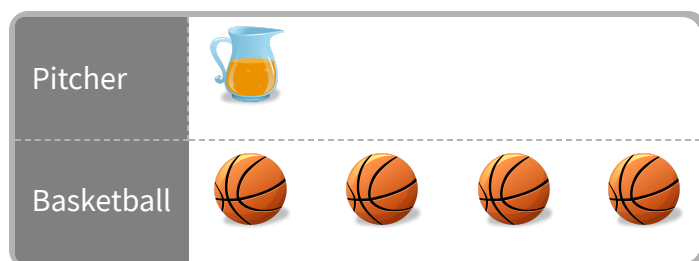
At the store, Makayla bought some umbrellas and clovers. She made a picture graph of the supplies she bought. How many clovers did she buy?

 clovers

Show your work

#2


At the store, Gabriel bought some pitchers and basketballs. He made a picture graph of the supplies he bought. How many pitchers did he buy?

 pitchers

Show your work

#3

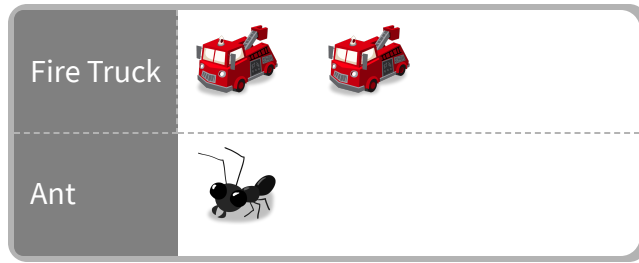
At the store, Brayden bought some fire trucks and tigers. He made a picture graph of the supplies he bought. How many tigers did he buy?

 tigers

Show your work

#4

At the store, Jacob bought some fire trucks and ants. He made a picture graph of the supplies he bought. Did Jacob buy more fire trucks or ants?

☐ fire trucks☐ ants

Show your work

#5

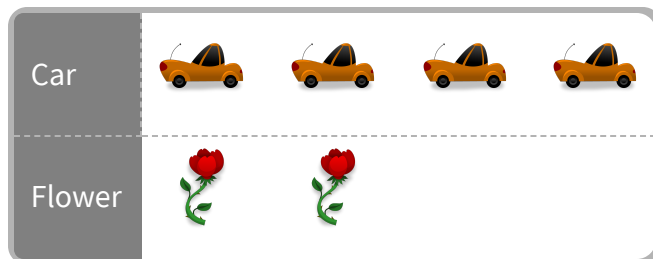
At the store, Benjamin bought some presents and compact discs. He made a picture graph of the supplies he bought. Did Benjamin buy more presents or compact discs?

☐ compact discs☐ presents

Show your work

#6

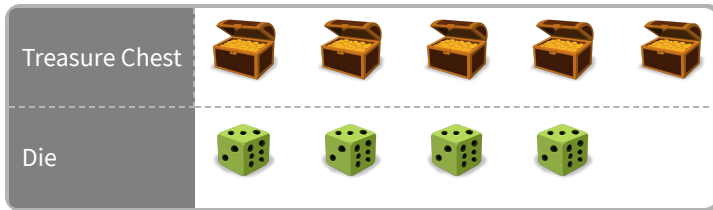
At the store, Anthony bought some cars and flowers. He made a picture graph of the supplies he bought. How many cars did he buy?

 cars

Show your work

#7

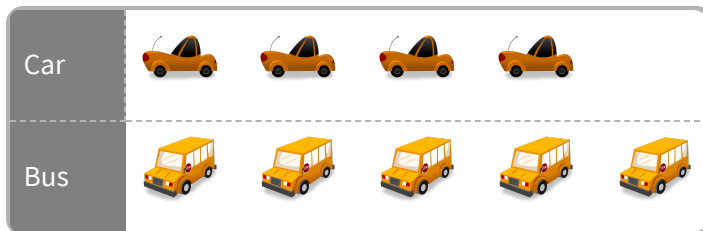
At the store, Lily bought some treasure chests and dice. She made a picture graph of the supplies she bought. How many dice did she buy?

 dice

Show your work

#8

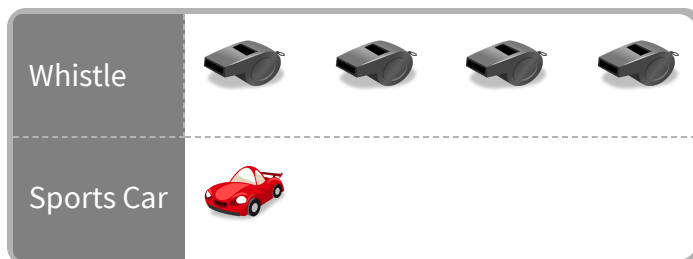
At the store, Daniel bought some cars and buses. He made a picture graph of the supplies he bought. Did Daniel buy more cars or buses?

☐ buses☐ cars

Show your work

#9

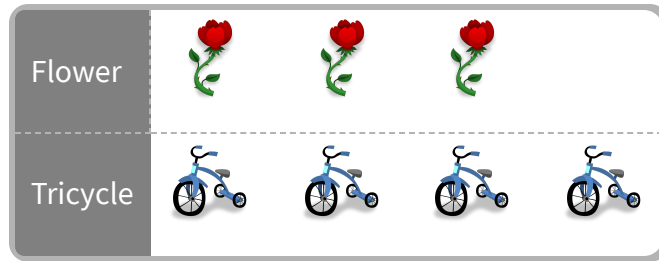
At the store, Sydney bought some whistles and sports cars. She made a picture graph of the supplies she bought. Did Sydney buy more whistles or sports cars?

☐ sports cars☐ whistles

Show your work

#10

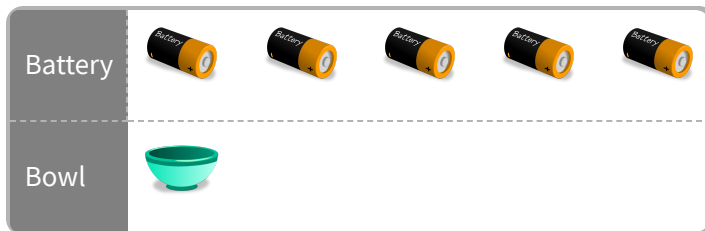
At the store, Maya bought some flowers and tricycles. She made a picture graph of the supplies she bought. Did Maya buy more flowers or tricycles?

☐ flowers☐ tricycles

Show your work

#11

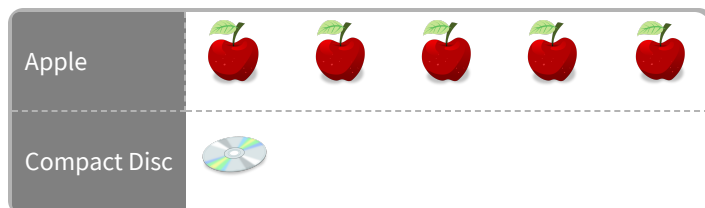
At the store, Owen bought some batteries and bowls. He made a picture graph of the supplies he bought. Did Owen buy less batteries or bowls?

☐ bowls☐ batteries

Show your work

#12

At the store, Angela bought some apples and compact discs. She made a picture graph of the supplies she bought. How many apples did she buy?

 apples

Show your work

| Question | Answer |
|----------|----------|
| #1 | 5 |
| #2 | 1 |
| #3 | 4 |
| #4 | choice 1 |
| #5 | choice 2 |
| #6 | 4 |
| #7 | 4 |
| #8 | choice 1 |
| #9 | choice 2 |
| #10 | choice 2 |
| #11 | choice 1 |
| #12 | 5 |