

#1

Count the action figures. Now type the missing numbers:



$$\boxed{} \text{ tens} + \boxed{} \text{ ones} = \boxed{}$$

Show your work

#2

Count the oranges. Now type the missing numbers:



$$\boxed{} \text{ tens} + \boxed{} \text{ ones} = \boxed{}$$

Show your work

#3

Count the pitchers. Now type the missing numbers:



$$\boxed{} \text{ tens} + \boxed{} \text{ ones} = \boxed{}$$

Show your work

#4

Count the fire trucks. Now type the missing numbers:




$$\boxed{} \text{ tens} + \boxed{} \text{ ones} = \boxed{}$$

Show your work

#5

Count the compact discs. Now type the missing numbers:




$$\boxed{} \text{ tens} + \boxed{} \text{ ones} = \boxed{}$$

Show your work

#6

Count the bowls. Now type the missing numbers:




$$\boxed{} \text{ tens} + \boxed{} \text{ ones} = \boxed{}$$

Show your work

#7

Count the ants. Now type the missing numbers:




$$\boxed{} \text{ tens} + \boxed{} \text{ ones} = \boxed{}$$

Show your work

#8

Count the trains. Now type the missing numbers:



$$\boxed{} \text{ tens} + \boxed{} \text{ ones} = \boxed{}$$

Show your work

#9

Count the buses. Now type the missing numbers:



$$\boxed{} \text{ tens} + \boxed{} \text{ ones} = \boxed{}$$

Show your work

#10

Count the compact discs. Now type the missing numbers:




$$\boxed{} \text{ tens} + \boxed{} \text{ ones} = \boxed{}$$

Show your work

#11

Count the ants. Now type the missing numbers:



$$\boxed{} \text{ tens} + \boxed{} \text{ ones} = \boxed{}$$

Show your work

#12

Count the cell phones. Now type the missing numbers:



$$\boxed{} \text{ tens} + \boxed{} \text{ ones} = \boxed{}$$

Show your work

Question	Answer
#1	5, 5, 0
#2	9, 9, 0
#3	11, 1, 1
#4	20, 0, 2
#5	4, 4, 0
#6	2, 2, 0
#7	13, 3, 1
#8	14, 4, 1
#9	5, 5, 0
#10	9, 9, 0
#11	3, 3, 0
#12	1, 1, 0