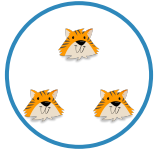
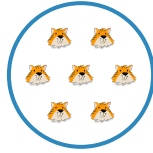


#1 Count the tigers. How many more tigers do you need to make 10?

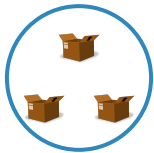


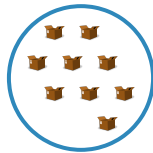


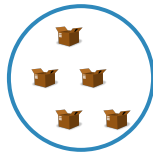



Show your work

#2 Count the boxes. How many more boxes do you need to make 10?










Show your work

#3 Count the bowls. How many more bowls do you need to make 10?

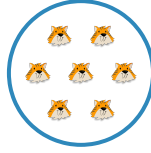
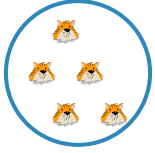







Show your work

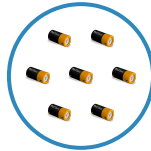

#4 Count the tigers. How many more tigers do you need to make 10?






Show your work

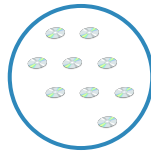
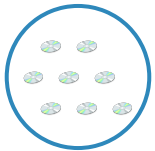
#5 Count the batteries. How many more batteries do you need to make 10?






Show your work

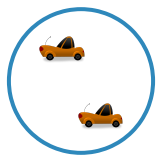
#6 Count the compact discs. How many more compact discs do you need to make 10?

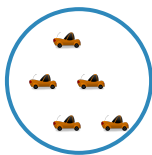


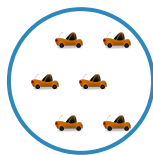



Show your work

#7 Count the cars. How many more cars do you need to make 10?



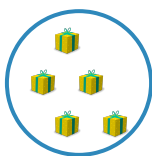


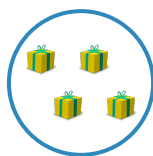



Show your work

#8 Count the presents. How many more presents do you need to make 10?

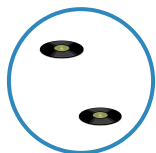


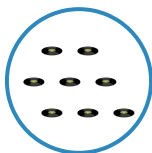





Show your work

#9 Count the records. How many more records do you need to make 10?

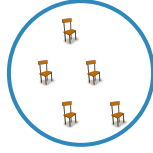









Show your work

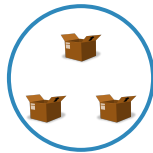
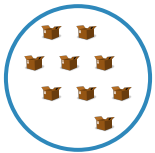
#10 Count the chairs. How many more chairs do you need to make 10?






Show your work

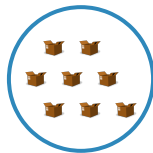
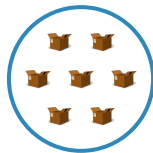
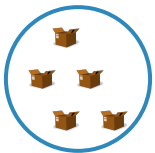
#11 Count the boxes. How many more boxes do you need to make 10?






Show your work

#12 Count the boxes. How many more boxes do you need to make 10?






Show your work

Question	Answer
#1	choice 3
#2	choice 3
#3	choice 1
#4	choice 1
#5	choice 1
#6	choice 3
#7	choice 1
#8	choice 2
#9	choice 2
#10	choice 2
#11	choice 3
#12	choice 1