


#1 Which objects have the same shape as this one.




Show your work

#2 Which objects have the same shape as this one.



Show your work

#3 Which objects have the same shape as this one.



Show your work

#4 Which objects have the same shape as this one.




Show your work

#5 Which objects have the same shape as this one.



Show your work

#6 Which objects have the same shape as this one.



Show your work

#7 Which objects have the same shape as this one.




Show your work

#8 Which objects have the same shape as this one.



Show your work

#9 Which objects have the same shape as this one.



Show your work

#10

Which objects have the same shape as this one.



Show your work

#11


Which objects have the same shape as this one.



Show your work

#12

Which objects have the same shape as this one.



Show your work

Question	Answer
#1	choice 3
#2	choice 1, choice 4
#3	choice 3, choice 2
#4	choice 2, choice 1
#5	choice 2, choice 3
#6	choice 1
#7	choice 3
#8	choice 1
#9	choice 1, choice 2
#10	choice 1, choice 3
#11	choice 4
#12	choice 2, choice 1