




#1


Which of the following objects is a octagon?



Show your work

#2



Which of the following objects is a rectangle?



Show your work

#3




Which of the following objects is a pentagon?



Show your work

#4




Which of the following objects is a rhombus?



Show your work

#5



Which of the following objects is a octagon?



Show your work

#6



Which of the following objects is a hexagon?



Show your work

#7




Which of the following objects is a hexagon?



Show your work

#8



Which of the following objects is a pentagon?



Show your work

#9

Which of the following objects is a star?






Show your work



#10




Which of the following objects is a triangle?



Show your work

#11



Which of the following objects is a octagon?



Show your work

#12

Which of the following objects is a triangle?



Show your work

| Question | Answer |
|----------|----------|
| #1 | choice 3 |
| #2 | choice 3 |
| #3 | choice 2 |
| #4 | choice 2 |
| #5 | choice 2 |
| #6 | choice 2 |
| #7 | choice 2 |
| #8 | choice 1 |
| #9 | choice 1 |
| #10 | choice 3 |
| #11 | choice 3 |
| #12 | choice 1 |