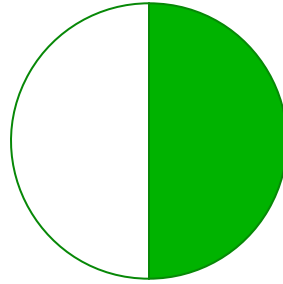



#1


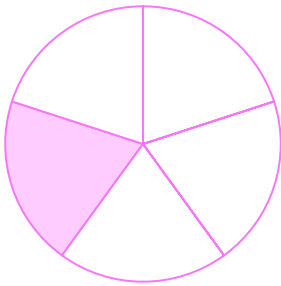
Which shape shows the fraction $\frac{1}{2}$?



Show your work

#2



Which shape shows the fraction $\frac{1}{5}$?



Show your work

#3


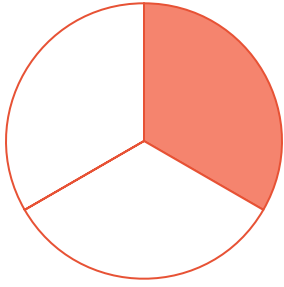
Which shape shows the fraction $\frac{1}{4}$?



Show your work

#4

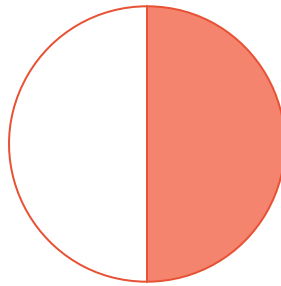

Which shape shows the fraction $\frac{1}{3}$?



Show your work

#5

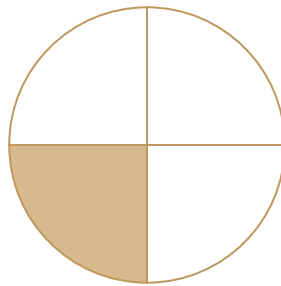

Which shape shows the fraction $\frac{1}{2}$?



Show your work

#6


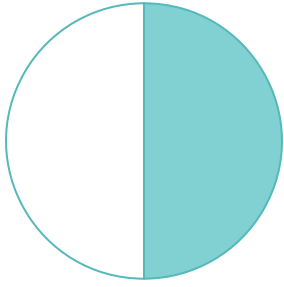
Which shape shows the fraction $\frac{1}{4}$?



Show your work

#7



Which shape shows the fraction $\frac{1}{2}$?



Show your work

#8

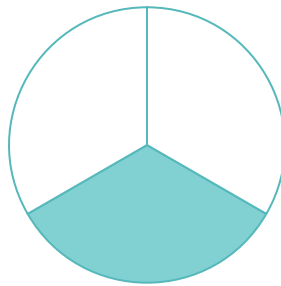

Which shape shows the fraction $\frac{1}{4}$?



Show your work

#9

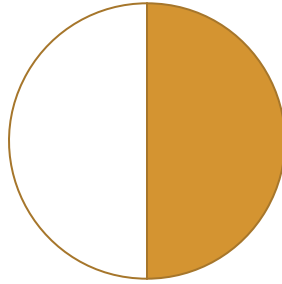

Which shape shows the fraction $\frac{1}{3}$?



Show your work

#10

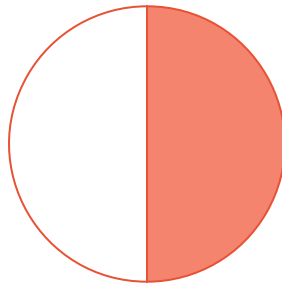

Which shape shows the fraction $\frac{1}{2}$?



Show your work

#11



Which shape shows the fraction $\frac{1}{2}$?



Show your work

#12

Which shape shows the fraction $\frac{1}{4}$?



Show your work

Question	Answer
#1	choice 2
#2	choice 1
#3	choice 1
#4	choice 1
#5	choice 2
#6	choice 2
#7	choice 1
#8	choice 1
#9	choice 2
#10	choice 2
#11	choice 2
#12	choice 1