
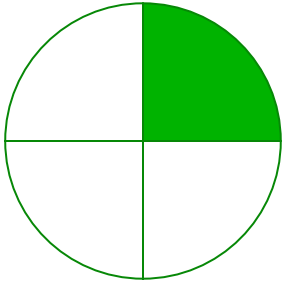


#1



Which shape shows the fraction  $\frac{1}{4}$ ?



Show your work

#2


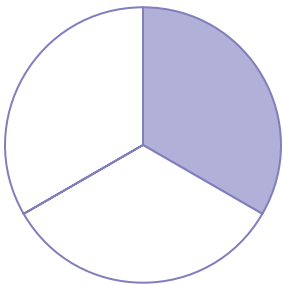
Which shape shows the fraction  $\frac{1}{4}$ ?



Show your work

#3



Which shape shows the fraction  $\frac{1}{3}$ ?



Show your work

#4

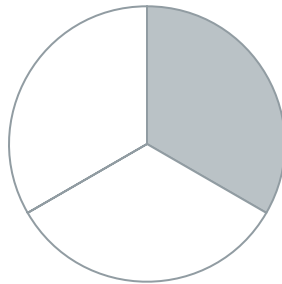

Which shape shows the fraction  $\frac{1}{4}$ ?



Show your work

#5



Which shape shows the fraction  $\frac{1}{3}$ ?



Show your work

#6


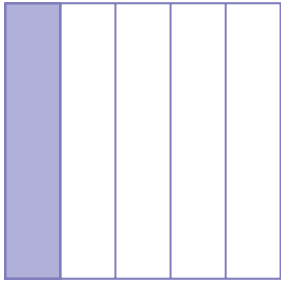
Which shape shows the fraction  $\frac{1}{4}$ ?



Show your work

#7

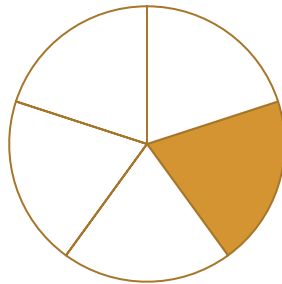

Which shape shows the fraction  $\frac{1}{4}$ ?



Show your work

#8


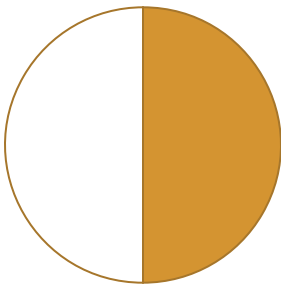
Which shape shows the fraction  $\frac{1}{5}$ ?



Show your work

#9

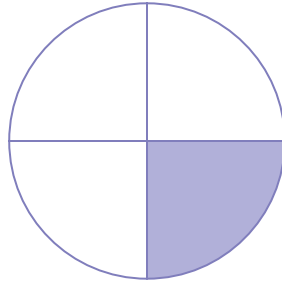

Which shape shows the fraction  $\frac{1}{2}$ ?



Show your work

#10

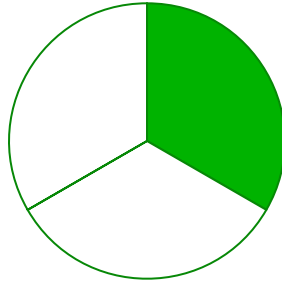

Which shape shows the fraction  $\frac{1}{4}$ ?



Show your work

#11


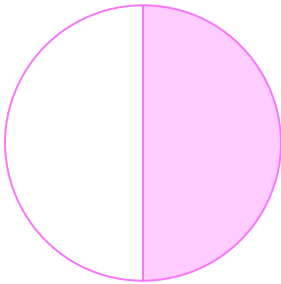
Which shape shows the fraction  $\frac{1}{3}$ ?



Show your work

#12

Which shape shows the fraction  $\frac{1}{2}$ ?



Show your work

Question	Answer
#1	choice 1
#2	choice 2
#3	choice 1
#4	choice 2
#5	choice 2
#6	choice 1
#7	choice 2
#8	choice 2
#9	choice 1
#10	choice 2
#11	choice 2
#12	choice 1