



#1


Which ladybug is the shortest?



Show your work

#2

Which battery is the shortest?



Show your work

#3

Which train is the longest?



Show your work



#4

Which bicycle is the longest?



Show your work

#5

Which can is the tallest?



Show your work

#6

Which car is the longest?



Show your work



#7



Which action figure is the tallest?



Show your work

#8

Which whistle is the shortest?



Show your work

#9

Which skateboard is the shortest?



Show your work



#10

Which bus is the longest?



Show your work

#11

Which lamp is the tallest?



Show your work

#12

Which battery is the longest?



Show your work



Question	Answer
#1	choice 2
#2	choice 3
#3	choice 2
#4	choice 3
#5	choice 2
#6	choice 1
#7	choice 1
#8	choice 1
#9	choice 1
#10	choice 2
#11	choice 1
#12	choice 1