

#1


Which of these clocks shows the time 9:00?

2:00 10:00 9:00 8:00

Show your work

#2

Which of these clocks shows the time 9:00?



Show your work

#3

Which of these clocks shows the time 5:00?

5:00 9:00 12:00 6:00

Show your work

#4

Which of these clocks shows the time 7:00?

4:00 11:00 5:00 7:00

Show your work

#5

Which of these clocks shows the time 8:00?

5:00 12:00 8:00 7:00

Show your work

#6

Which of these clocks shows the time 7:00?

7:00 11:00 3:00 6:00

Show your work

#7

Which of these clocks shows the time 7:00?

7:00 8:00 2:00 4:00

Show your work

#8

Which of these clocks shows the time 5:00?

2:00 5:00 12:00 6:00

Show your work

#9


Which of these clocks shows the time 9:00?

8:00 12:00 9:00 5:00

Show your work

#10

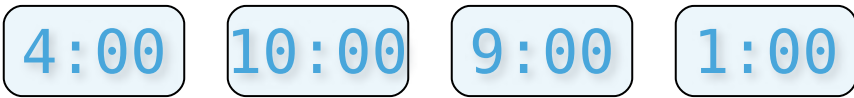
Which of these clocks shows the time 8:00?



Show your work

#11

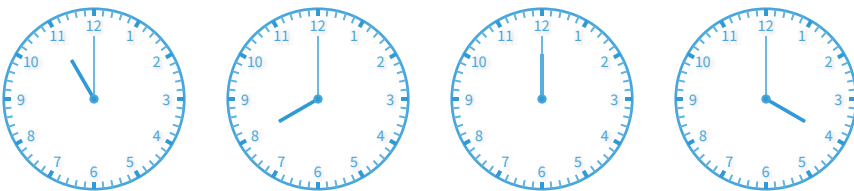
Which of these clocks shows the time 4:00?



Show your work

#12

Which of these clocks shows the time 4:00?



Show your work

Question	Answer
#1	choice 3
#2	choice 3
#3	choice 1
#4	choice 4
#5	choice 3
#6	choice 1
#7	choice 1
#8	choice 2
#9	choice 3
#10	choice 1
#11	choice 1
#12	choice 4