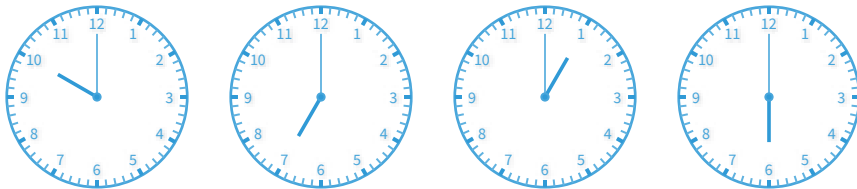


#1

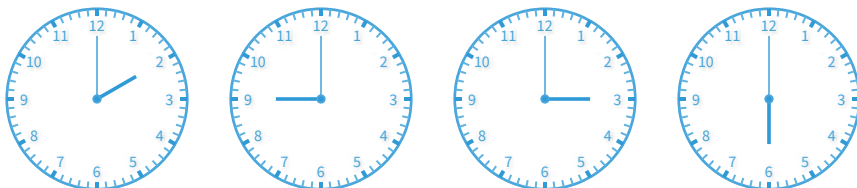
Which of these clocks shows the time 6:00?



Show your work

#2

Which of these clocks shows the time 9:00?



Show your work

#3

Which of these clocks shows the time 3:00?



Show your work

#4

Which of these clocks shows the time 12:00?

9:00 12:00 7:00 4:00

Show your work

#5

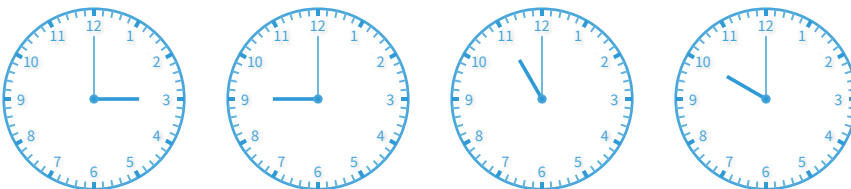
Which of these clocks shows the time 9:00?

3:00 9:00 11:00 1:00

Show your work

#6

Which of these clocks shows the time 10:00?



Show your work

#7


Which of these clocks shows the time 3:00?

9:00 4:00 12:00 3:00

Show your work

#8

Which of these clocks shows the time 1:00?



Show your work

#9

Which of these clocks shows the time 4:00?

5:00 4:00 7:00 6:00

Show your work

#10


Which of these clocks shows the time 4:00?

4:00 2:00 7:00 10:00

Show your work

#11


Which of these clocks shows the time 4:00?



Show your work

#12

Which of these clocks shows the time 5:00?



Show your work

Question	Answer
#1	choice 4
#2	choice 2
#3	choice 2
#4	choice 2
#5	choice 2
#6	choice 4
#7	choice 4
#8	choice 4
#9	choice 2
#10	choice 1
#11	choice 2
#12	choice 3