



#1



Which of the following objects is a pentagon?



Show your work

#2



Which of the following objects is a circle?



Show your work

#3



Which of the following objects is a parallelogram?



Show your work

#4



Which of the following objects is a star?



Show your work

#5




Which of the following objects is a triangle?



Show your work

#6



Which of the following objects is a octagon?



Show your work

#7

Which of the following objects is a star?







Show your work

#8

Which of the following objects is a hexagon?








Show your work

#9

Which of the following objects is a star?








Show your work

#10


Which of the following objects is a star?



Show your work

#11




Which of the following objects is a rectangle?



Show your work

#12

Which of the following objects is a circle?



Show your work

Question	Answer
#1	choice 3
#2	choice 2
#3	choice 2
#4	choice 3
#5	choice 2
#6	choice 1
#7	choice 1
#8	choice 2
#9	choice 3
#10	choice 3
#11	choice 2
#12	choice 2