



#1




Which of the following objects is a hexagon?



Show your work

#2


Which of the following objects is a octagon?



Show your work

#3




Which of the following objects is a star?



Show your work

#4

Which of the following objects is a pentagon?









Show your work

#5

Which of the following objects is a star?








Show your work

#6

Which of the following objects is a pentagon?








Show your work

#7



Which of the following objects is a star?



Show your work

#8



Which of the following objects is a hexagon?



Show your work

#9

Which of the following objects is a star?






Show your work



#10



Which of the following objects is a hexagon?



Show your work

#11



Which of the following objects is a pentagon?



Show your work

#12

Which of the following objects is a circle?



Show your work

Question	Answer
#1	choice 1
#2	choice 1
#3	choice 3
#4	choice 2
#5	choice 3
#6	choice 2
#7	choice 1
#8	choice 3
#9	choice 2
#10	choice 3
#11	choice 1
#12	choice 2