

#1

The clocks show three things Anthony did Monday evening. Which did Anthony do first?

7:30

phone
call

5:00

fed fish

7:00

play

- play
 fed fish
 phone call

Show your work

#2

The clocks show three things Dylan did Thursday evening. Which did Dylan do last?

5:30

soccer

7:00

homework

9:00

eat

- soccer
 homework
 eat

Show your work

#3

The clocks show three things Hailey did Tuesday evening. Which did Hailey do first?

7:00

math

6:30

science

7:30

history

- science
 history
 math

Show your work

#4

The clocks show three things Zoe did Wednesday evening. Which did Zoe do first?

6:00

play games

8:00

violin

6:30

walk dog

- play games violin walk dog

Show your work

#5

The clocks show three things Lily did Monday evening. Which did Lily do first?

5:30

phone call

7:30

fed fish

6:00

play

- phone call play fed fish

Show your work

#6

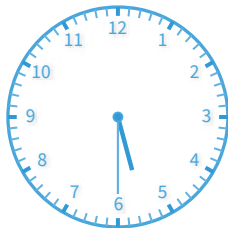
The clocks show three things Nathan did Tuesday evening. Which did Nathan do first?



math



science



history

- science math history

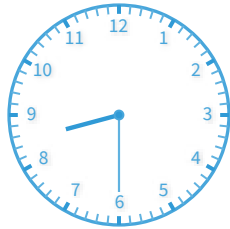
Show your work

#7

The clocks show three things Gavin did Monday evening. Which did Gavin do first?



phone call



fed fish



play

- phone call
 fed fish
 play

Show your work

#8

The clocks show three things Elizabeth did Thursday evening. Which did Elizabeth do last?



soccer



homework



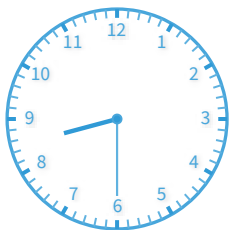
eat

- soccer
 homework
 eat


Show your work

#9


The clocks show three things Anthony did Tuesday evening. Which did Anthony do first?



math



science



history

- science
 history
 math

Show your work

#10

The clocks show three things Isabella did Thursday evening. Which did Isabella do last?

7:30	9:00	7:00
soccer	homework	eat

- homework
 eat
 soccer

Show your work

#11

The clocks show three things Madison did Monday evening. Which did Madison do first?

7:30	9:30	9:00
phone call	fed fish	play

- phone call
 play
 fed fish

Show your work

#12

The clocks show three things Evan did Wednesday evening. Which did Evan do last?

7:00	9:00	8:00
play games	violin	walk dog

- violin
 play games
 walk dog

Show your work

Question	Answer
#1	choice 2
#2	choice 3
#3	choice 1
#4	choice 1
#5	choice 1
#6	choice 3
#7	choice 1
#8	choice 2
#9	choice 2
#10	choice 1
#11	choice 1
#12	choice 1