


#1

The clocks show three things Ava did Wednesday evening. Which did Ava do first?



play games



violin



walk dog

- play games    
  walk dog    
  violin

Show your work

#2

The clocks show three things Jack did Thursday evening. Which did Jack do last?



soccer



homework



eat

- homework    
  soccer    
  eat

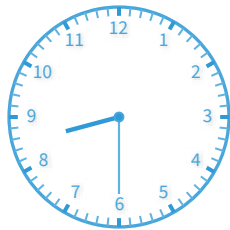
Show your work

#3


The clocks show three things Christopher did Thursday evening. Which did Christopher do last?



soccer



homework



eat

- eat    
  soccer    
  homework

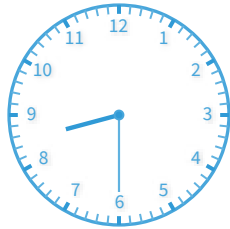
Show your work

#4

The clocks show three things Ashley did Wednesday evening. Which did Ashley do first?



play games



violin



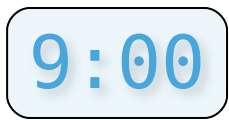
walk dog

- violin     
  play games     
  walk dog

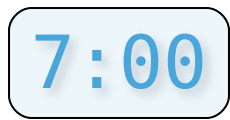
Show your work

#5

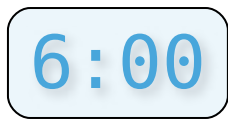
The clocks show three things Aiden did Wednesday evening. Which did Aiden do first?



play games



violin



walk dog

- play games     
  walk dog     
  violin

Show your work

#6

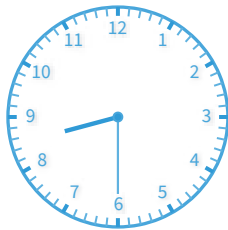
The clocks show three things Jacob did Monday evening. Which did Jacob do first?



phone call



fed fish



play

- phone call     
  play     
  fed fish

Show your work

#7

The clocks show three things Gabriel did Monday evening. Which did Gabriel do last?



phone  
call



fed fish



play

- fed fish     
  play     
  phone call

Show your work

#8


The clocks show three things Zoe did Wednesday evening. Which did Zoe do first?



play games



violin



walk dog

- play games     
  walk dog     
  violin

Show your work

#9


The clocks show three things Luke did Wednesday evening. Which did Luke do last?



play games



violin



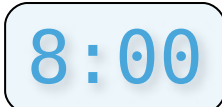
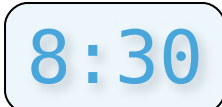

walk dog

- violin     
  walk dog     
  play games

Show your work

#10

The clocks show three things Michael did Thursday evening. Which did Michael do last?


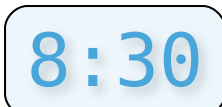
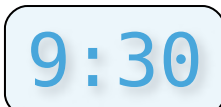
 soccer	 homework	 eat
---	---	--

- homework     
  soccer     
  eat

Show your work

#11

The clocks show three things William did Wednesday evening. Which did William do last?

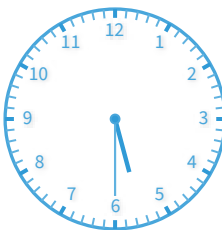


 play games	 violin	 walk dog
--	--	--

- walk dog     
  play games     
  violin

Show your work

#12

The clocks show three things Jack did Monday evening. Which did Jack do last?

 phone call	 fed fish	 play
---	---	---

- play     
  fed fish     
  phone call

Show your work

Question	Answer
#1	choice 3
#2	choice 1
#3	choice 3
#4	choice 3
#5	choice 2
#6	choice 2
#7	choice 2
#8	choice 2
#9	choice 3
#10	choice 3
#11	choice 1
#12	choice 1