


#1

Are there more cell phones or compact discs?



Show your work

#2


Is there a greater number of tigers or bananas?



Show your work

#3


Are there more trains or boats?



Show your work

#4

Is there a smaller number of oranges or lamps?



Show your work

#5

Is there a smaller number of action figures or clovers?



Show your work

#6

Are there fewer fire trucks or buses?



Show your work

#7

Are there fewer flowers or apples?



Show your work

#8

Is there a smaller number of sports cars or buses?



Show your work

#9

Is there a greater number of bicycles or cars?



Show your work

#10

Is there a greater number of ants or treasure chests?



Show your work

#11

Is there a smaller number of basketballs or lamps?



Show your work

#12

Is there a smaller number of lamps or treasure chests?



Show your work

Question	Answer
#1	choice 2
#2	choice 2
#3	choice 2
#4	choice 2
#5	choice 1
#6	choice 1
#7	choice 1
#8	choice 2
#9	choice 1
#10	choice 1
#11	choice 2
#12	choice 1