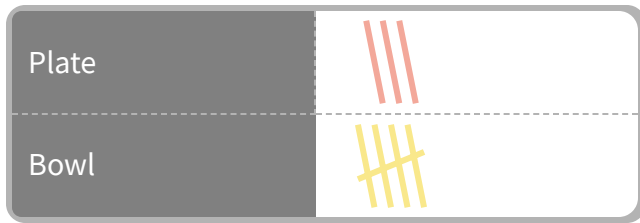




#4


This is a chart of the dinnerware in Sarah's kitchen.  
How many plates are in Sarah's kitchen?




Show your work

#5

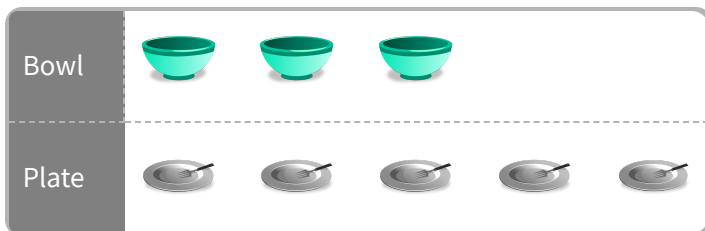
At the zoo, Benjamin made a tally chart of the animals that he had seen. How many tigers did Benjamin see?




Show your work

#6

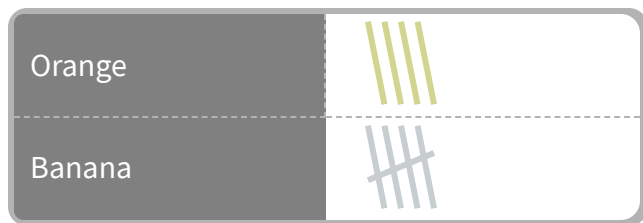
This is a chart of the dinnerware in Kaylee's kitchen.  
How many bowls are in Kaylee's kitchen?




Show your work

#7

Daniel's mom gave him a chart of the fruit he needs to buy. How many oranges does Daniel have to buy?




- 4                       3  
 5                       7

Show your work

#8

Julia's mom gave her a chart of the fruit she needs to buy. How many bananas does Julia have to buy?



- 0                       4  
 2                       5

Show your work

#9

At the sphere store, Ethan made a chart of the spheres that he had seen. Did Ethan see more globes or soccer balls?

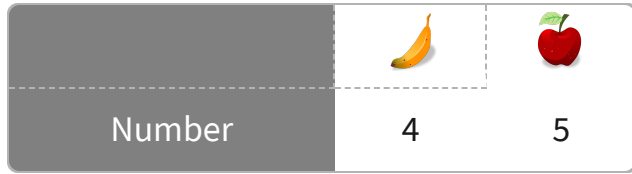


- 

Show your work

#10

Evan's mom gave him a chart of the fruit he needs to buy. Does Evan have to buy more bananas or apples?

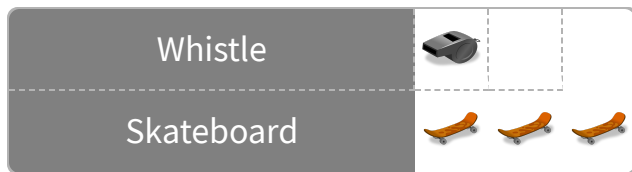





Show your work

#11

Samantha is doing inventory at her sporting goods store and made a chart. Are there more whistles or skateboards in the store?

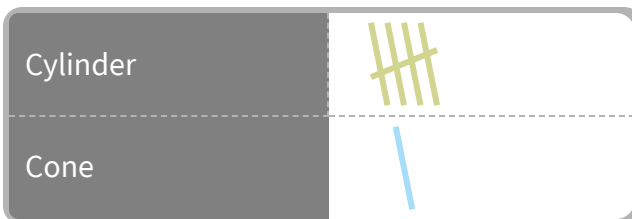





Show your work

#12

In a box of building blocks Christopher found a chart of the different blocks. How many cylinders are there?




Show your work

Question	Answer
#1	4
#2	choice 2
#3	5
#4	3
#5	2
#6	3
#7	4
#8	2
#9	choice 2
#10	choice 1
#11	choice 1
#12	5