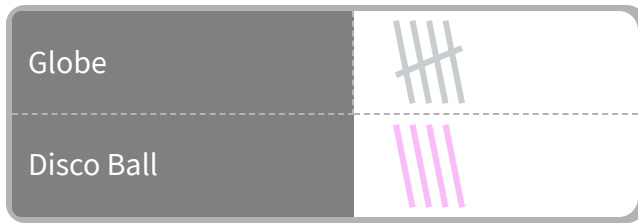


#1

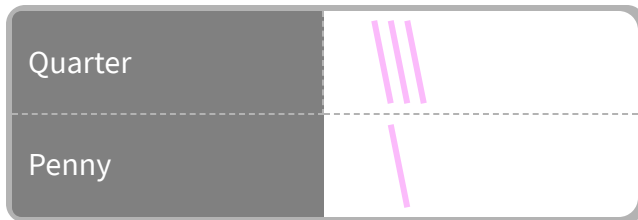
At the sphere store, Caleb made a chart of the spheres that he had seen. How many globes did Caleb see?



Show your work

#2

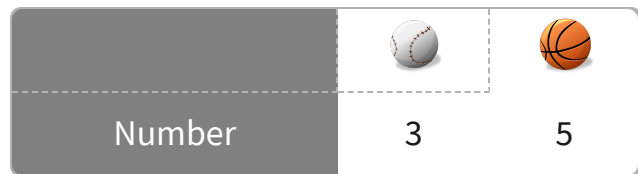
Isabelle made a chart of the coins in her pocket. How many quarters does Isabelle have?



Show your work

#3

The chart shows the number of balls in the school gym. Are there more baseballs or basketballs?










Show your work

#4

At the zoo, Gabriel made a tally chart of all the animals that he had seen. Did Gabriel see more ants or tigers?

Ant	   
Tiger	







Show your work

#5

In a box of building blocks Angela found a chart of the different blocks. How many cubes are there?

		
Number	2	1

 4

 5



 3

 2

Show your work

#6

The chart shows the number of balls in the school gym. How many basketballs are there?

		
Number	4	3

 5

 7


 6

 4

Show your work

#7

This is a chart of the dinnerware in Sydney's kitchen.
How many bowls are in Sydney's kitchen?




- 1
- 4
- 6
- 3

Show your work

#8

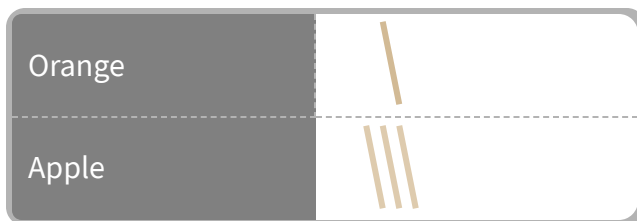
Luke made a chart of the coins in his pocket.
How many pennies does Luke have?



Show your work

#9

Christopher's mom gave him a chart of the fruit he needs to buy.
How many oranges does Christopher have to buy?

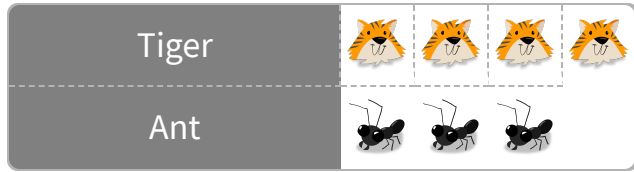


- 3
- 4
- 2
- 1

Show your work

#10

At the zoo, Logan made a tally chart of all the animals that he had seen. Did Logan see more tigers or ants?

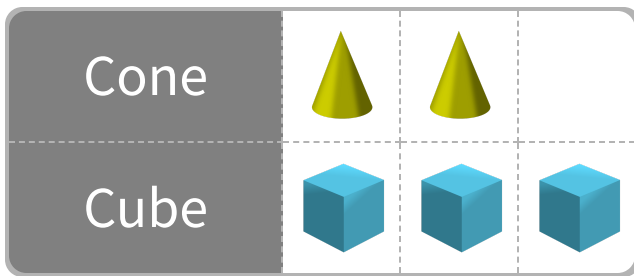




Show your work

#11

In a box of building blocks William found a chart of the different blocks. How many cones are there?



Show your work

#12

Nathan made a chart of the coins in his pocket. How many dimes does Nathan have?


 4

 3

 1

 6

Show your work

Question	Answer
#1	5
#2	3
#3	choice 1
#4	choice 2
#5	2
#6	4
#7	4
#8	1
#9	1
#10	choice 1
#11	2
#12	3